

Die vier Grundrechenarten im Zahlenraum 1 000

Code Nr. 1

Nr. 1

Name:
Klasse:

Datum:

1.) ●●	$220 + 120 = \underline{\hspace{2cm}}$	$300 - 80 = \underline{\hspace{2cm}}$	A 1	340 220
2.) ●●	$240 + 200 = \underline{\hspace{2cm}}$	$320 + 50 = \underline{\hspace{2cm}}$	A 2	440 370
3.) ●●	$400 : 20 = \underline{\hspace{2cm}}$	$100 + 300 = \underline{\hspace{2cm}}$	A 3	20 400
4.) ●●	$2 \cdot 200 = \underline{\hspace{2cm}}$	$20 \cdot 10 = \underline{\hspace{2cm}}$	A 4	400 200
5.) ●●	$500 + 60 = \underline{\hspace{2cm}}$	$25 + 200 = \underline{\hspace{2cm}}$	A 5	560 225
6.) ●●	$450 - 200 = \underline{\hspace{2cm}}$	$8 \cdot 29 = \underline{\hspace{2cm}}$	A 6	250 232
7.) ●●	$300 - 180 = \underline{\hspace{2cm}}$	$430 + 32 = \underline{\hspace{2cm}}$	A 7	120 462
8.) ●●	$300 - 99 = \underline{\hspace{2cm}}$	$410 - \underline{\hspace{2cm}} = 210$	A 8	201 200
9.) ●●	$347 - 200 = \underline{\hspace{2cm}}$	$800 : \underline{\hspace{2cm}} = 20$	A 9	147 40
10.) ●●	$548 - 20 = \underline{\hspace{2cm}}$	$8 \cdot 59 = \underline{\hspace{2cm}}$	A 10	528 472
11.) ●●	$700 + 70 = \underline{\hspace{2cm}}$	$308 - 80 = \underline{\hspace{2cm}}$	A 11	770 228
12.) ●●	$370 + \underline{\hspace{2cm}} = 382$	$747 : 83 = \underline{\hspace{2cm}}$	A 12	12 9
13.) ●●	$\underline{\hspace{2cm}} + 30 = 420$	$650 - 18 = \underline{\hspace{2cm}}$	A 13	390 632
14.) ●●	$161 : 23 = \underline{\hspace{2cm}}$	$20 \cdot 20 = \underline{\hspace{2cm}}$	A 14	7 400
15.) ●●	$900 : 300 = \underline{\hspace{2cm}}$	$95 : \underline{\hspace{2cm}} = 19$	A 15	3 5

© 2015 Bernhard Storch


erstellt mit RAGTIME EDU tools



netzwerk
lernen

Vergleiche mit dem Lösungstreifen und markiere hier, wie du

zur Vollversion



Die vier Grundrechenarten im Zahlenraum 1 000

Code Nr. 2

Nr. 2

Name:
Klasse:

Datum:

1.) ●●

$16 \cdot 3 = \underline{\hspace{2cm}}$

$220 - 100 = \underline{\hspace{2cm}}$

A 1

48
120

2.) ●●

$13 \cdot 4 = \underline{\hspace{2cm}}$

$4 \cdot 110 = \underline{\hspace{2cm}}$

A 2

52
440

3.) ●●

$100 + 260 = \underline{\hspace{2cm}}$

$20 + 400 = \underline{\hspace{2cm}}$

A 3

360
420

4.) ●●

$400 - 200 = \underline{\hspace{2cm}}$

$350 + 70 = \underline{\hspace{2cm}}$

A 4

200
420

5.) ●●

$4 \cdot 130 = \underline{\hspace{2cm}}$

$555 : 15 = \underline{\hspace{2cm}}$

A 5

520
37

6.) ●●

$380 + \underline{\hspace{2cm}} = 490$

$570 - 9 = \underline{\hspace{2cm}}$

A 6

110
561

7.) ●●

$440 - \underline{\hspace{2cm}} = 431$

$600 : 3 = \underline{\hspace{2cm}}$

A 7

9
200

8.) ●●

$189 : 21 = \underline{\hspace{2cm}}$

$580 + 90 = \underline{\hspace{2cm}}$

A 8

9
670

9.) ●●

$400 + 260 = \underline{\hspace{2cm}}$

$20 \cdot 22 = \underline{\hspace{2cm}}$

A 9

660
440

10.) ●●

$25 \cdot 5 = \underline{\hspace{2cm}}$

$480 : \underline{\hspace{2cm}} = 30$

A 10

125
16

11.) ●●

$\underline{\hspace{2cm}} - 100 = 105$

$633 - \underline{\hspace{2cm}} = 523$

A 11

205
110

12.) ●●

$200 : \underline{\hspace{2cm}} = 10$

$750 : \underline{\hspace{2cm}} = 30$

A 12

20
25

13.) ●●

$10 \cdot 60 = \underline{\hspace{2cm}}$

$675 : \underline{\hspace{2cm}} = 9$

A 13

600
75

14.) ●●

$30 \cdot \underline{\hspace{2cm}} = 900$

$3 \cdot 200 = \underline{\hspace{2cm}}$

A 14

30
600

15.) ●●

$15 \cdot 50 = \underline{\hspace{2cm}}$

$\underline{\hspace{2cm}} : 96 = 8$

A 15

750
768

© 2015 Bernhard Storch

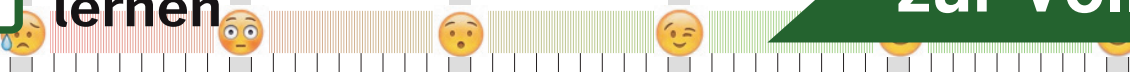
erstellt mit RAGTIME EDU tools



netzwerk
lernen

Vergleiche mit dem Lösungstreifen und markiere hier, wie du

zur Vollversion



Die vier Grundrechenarten im Zahlenraum 1 000

Code Nr. 3

Nr. 3

Name:
Klasse:

Datum:

1.) ●●	$400 : 20 = \underline{\hspace{2cm}}$	$360 : 18 = \underline{\hspace{2cm}}$	A 1	20 20
2.) ●●	$4 \cdot 83 = \underline{\hspace{2cm}}$	$5 \cdot 30 = \underline{\hspace{2cm}}$	A 2	332 150
3.) ●●	$290 + 10 = \underline{\hspace{2cm}}$	$180 : 20 = \underline{\hspace{2cm}}$	A 3	300 9
4.) ●●	$320 - 200 = \underline{\hspace{2cm}}$	$300 - 90 = \underline{\hspace{2cm}}$	A 4	120 210
5.) ●●	$200 : 20 = \underline{\hspace{2cm}}$	$360 - 200 = \underline{\hspace{2cm}}$	A 5	10 160
6.) ●●	$170 : \underline{\hspace{1cm}} = 17$	$400 - 100 = \underline{\hspace{2cm}}$	A 6	10 300
7.) ●●	$301 - 200 = \underline{\hspace{2cm}}$	$200 - \underline{\hspace{1cm}} = 157$	A 7	101 43
8.) ●●	$20 \cdot \underline{\hspace{1cm}} = 200$	$23 \cdot 20 = \underline{\hspace{2cm}}$	A 8	10 460
9.) ●●	$600 : 10 = \underline{\hspace{2cm}}$	$331 - 200 = \underline{\hspace{2cm}}$	A 9	60 131
10.) ●●	$430 - \underline{\hspace{1cm}} = 280$	$620 : 31 = \underline{\hspace{2cm}}$	A 10	150 20
11.) ●●	$560 : \underline{\hspace{1cm}} = 4$	$703 - 90 = \underline{\hspace{2cm}}$	A 11	140 613
12.) ●●	$600 : \underline{\hspace{1cm}} = 30$	$\underline{\hspace{1cm}} + 17 = 417$	A 12	20 400
13.) ●●	$15 \cdot \underline{\hspace{1cm}} = 750$	$480 - \underline{\hspace{1cm}} = 80$	A 13	50 400
14.) ●●	$700 - 160 = \underline{\hspace{2cm}}$	$900 : 150 = \underline{\hspace{2cm}}$	A 14	540 6
15.) ●●	$\underline{\hspace{1cm}} - 360 = 40$	$\underline{\hspace{1cm}} + 200 = 680$	A 15	400 480

© 2015 Bernhard Storch


erstellt mit RAGTIME EDU tools



netzwerk
lernen

Vergleiche mit dem Lösungstreifen und markiere hier, wie du

zur Vollversion



Name:
Klasse:

Datum:

1.) ●●

$280 - 60 = \underline{\hspace{2cm}}$

$250 + 28 = \underline{\hspace{2cm}}$

A 1

220
278

2.) ●●

$350 - 34 = \underline{\hspace{2cm}}$

$5 \cdot 23 = \underline{\hspace{2cm}}$

A 2

316
115

3.) ●●

$10 \cdot 11 = \underline{\hspace{2cm}}$

$220 - 30 = \underline{\hspace{2cm}}$

A 3

110
190

4.) ●●

$300 + 200 = \underline{\hspace{2cm}}$

$200 + 362 = \underline{\hspace{2cm}}$

A 4

500
562

5.) ●●

$4 \cdot 70 = \underline{\hspace{2cm}}$

$10 \cdot 50 = \underline{\hspace{2cm}}$

A 5

280
500

6.) ●●

$600 : 5 = \underline{\hspace{2cm}}$

$300 - 75 = \underline{\hspace{2cm}}$

A 6

120
225

7.) ●●

$80 + \underline{\hspace{2cm}} = 570$

$200 : 20 = \underline{\hspace{2cm}}$

A 7

490
10

8.) ●●

$7 \cdot 84 = \underline{\hspace{2cm}}$

$10 \cdot \underline{\hspace{2cm}} = 240$

A 8

588
24

9.) ●●

$207 : \underline{\hspace{2cm}} = 9$

$380 + 100 = \underline{\hspace{2cm}}$

A 9

23
480

10.) ●●

$200 : 10 = \underline{\hspace{2cm}}$

$13 \cdot 51 = \underline{\hspace{2cm}}$

A 10

20
663

11.) ●●

$60 : \underline{\hspace{2cm}} = 6$

$490 : 70 = \underline{\hspace{2cm}}$

A 11

10
7

12.) ●●

$\underline{\hspace{2cm}} \cdot 40 = 800$

$\underline{\hspace{2cm}} : 4 = 25$

A 12

20
100

13.) ●●

$\underline{\hspace{2cm}} \cdot 40 = 800$

$\underline{\hspace{2cm}} + 100 = 200$

A 13

20
100

14.) ●●

$700 - \underline{\hspace{2cm}} = 400$

$428 - 180 = \underline{\hspace{2cm}}$

A 14

300
248

15.) ●●

$27 + 420 = \underline{\hspace{2cm}}$

$410 - 400 = \underline{\hspace{2cm}}$

A 15

447
10

© 2015 Bernhard Storch

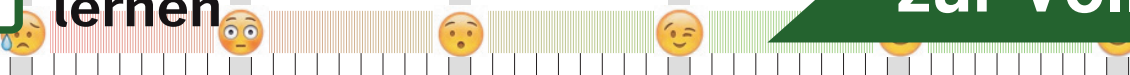
erstellt mit RAGTIME EDU tools



netzwerk
lernen

Vergleiche mit dem Lösungstreifen und markiere hier, wie du

zur Vollversion



Name:
Klasse:

Datum:

1.) ●●	$200 - 46 = \underline{\hspace{2cm}}$	$182 - 69 = \underline{\hspace{2cm}}$	A 1	154 113
2.) ●●	$20 \cdot 20 = \underline{\hspace{2cm}}$	$340 + 60 = \underline{\hspace{2cm}}$	A 2	400 400
3.) ●●	$19 \cdot 6 = \underline{\hspace{2cm}}$	$300 : 50 = \underline{\hspace{2cm}}$	A 3	114 6
4.) ●●	$20 \cdot 19 = \underline{\hspace{2cm}}$	$10 \cdot 43 = \underline{\hspace{2cm}}$	A 4	380 430
5.) ●●	$340 + 80 = \underline{\hspace{2cm}}$	$400 - 150 = \underline{\hspace{2cm}}$	A 5	420 250
6.) ●●	$72 : \underline{\hspace{1cm}} = 8$	$112 - \underline{\hspace{1cm}} = 82$	A 6	9 30
7.) ●●	$300 - \underline{\hspace{1cm}} = 220$	$600 + \underline{\hspace{1cm}} = 643$	A 7	80 43
8.) ●●	$400 + \underline{\hspace{1cm}} = 680$	$330 + 240 = \underline{\hspace{2cm}}$	A 8	280 570
9.) ●●	$430 - 250 = \underline{\hspace{2cm}}$	$10 \cdot 16 = \underline{\hspace{2cm}}$	A 9	180 160
10.) ●●	$300 - \underline{\hspace{1cm}} = 0$	$542 - \underline{\hspace{1cm}} = 442$	A 10	300 100
11.) ●●	$230 + 230 = \underline{\hspace{2cm}}$	$\underline{\hspace{1cm}} - 100 = 480$	A 11	460 580
12.) ●●	$\underline{\hspace{1cm}} - 300 = 90$	$\underline{\hspace{1cm}} + 87 = 887$	A 12	390 800
13.) ●●	$120 : \underline{\hspace{1cm}} = 6$	$\underline{\hspace{1cm}} + 463 = 913$	A 13	20 450
14.) ●●	$\underline{\hspace{1cm}} + 500 = 880$	$\underline{\hspace{1cm}} + 140 = 740$	A 14	380 600
15.) ●●	$510 : 30 = \underline{\hspace{2cm}}$	$\underline{\hspace{1cm}} + 200 = 480$	A 15	17 280

© 2015 Bernhard Storch


erstellt mit RAGTIME EDU tools



netzwerk
lernen

Vergleiche mit dem Lösungstreifen und markiere hier, wie du

zur Vollversion



Die vier Grundrechenarten im Zahlenraum 1 000

Code Nr. 30

Nr. 30

Name:
Klasse:

Datum:

1.) ●●	$150 + 200 = \underline{\hspace{2cm}}$	$200 : 10 = \underline{\hspace{2cm}}$	A 1	350 20
2.) ●●	$400 + 9 = \underline{\hspace{2cm}}$	$300 + 100 = \underline{\hspace{2cm}}$	A 2	409 400
3.) ●●	$400 - 98 = \underline{\hspace{2cm}}$	$212 - 200 = \underline{\hspace{2cm}}$	A 3	302 12
4.) ●●	$348 : 58 = \underline{\hspace{2cm}}$	$200 : 20 = \underline{\hspace{2cm}}$	A 4	6 10
5.) ●●	$16 \cdot 26 = \underline{\hspace{2cm}}$	$240 - 40 = \underline{\hspace{2cm}}$	A 5	416 200
6.) ●●	$30 + 100 = \underline{\hspace{2cm}}$	$518 : \underline{\hspace{2cm}} = 74$	A 6	130 7
7.) ●●	$9 \cdot 50 = \underline{\hspace{2cm}}$	$440 - 200 = \underline{\hspace{2cm}}$	A 7	450 240
8.) ●●	$400 : 8 = \underline{\hspace{2cm}}$	$300 - \underline{\hspace{2cm}} = 80$	A 8	50 220
9.) ●●	$24 \cdot \underline{\hspace{2cm}} = 480$	$100 + 190 = \underline{\hspace{2cm}}$	A 9	20 290
10.) ●●	$230 + 85 = \underline{\hspace{2cm}}$	$100 + \underline{\hspace{2cm}} = 590$	A 10	315 490
11.) ●●	$20 \cdot \underline{\hspace{2cm}} = 600$	$10 \cdot \underline{\hspace{2cm}} = 690$	A 11	30 69
12.) ●●	$20 \cdot 30 = \underline{\hspace{2cm}}$	$450 - 100 = \underline{\hspace{2cm}}$	A 12	600 350
13.) ●●	$90 : 3 = \underline{\hspace{2cm}}$	$600 + \underline{\hspace{2cm}} = 830$	A 13	30 230
14.) ●●	$660 + \underline{\hspace{2cm}} = 710$	$780 : \underline{\hspace{2cm}} = 30$	A 14	50 26
15.) ●●	$20 \cdot \underline{\hspace{2cm}} = 360$	$51 + 200 = \underline{\hspace{2cm}}$	A 15	18 251

© 2015 Bernhard Storch


erstellt mit RAGTIME EDU tools



netzwerk
lernen

Vergleiche mit dem Lösungstreifen und markiere hier, wie du

zur Vollversion



Name:
Klasse:

Datum:

1.) ●●

$312 - 25 = \underline{\hspace{2cm}}$

$168 : 21 = \underline{\hspace{2cm}}$

A 1

287
8

2.) ●●

$98 - 40 = \underline{\hspace{2cm}}$

$14 \cdot 6 = \underline{\hspace{2cm}}$

A 2

58
84

3.) ●●

$2 + 400 = \underline{\hspace{2cm}}$

$8 \cdot 1 = \underline{\hspace{2cm}}$

A 3

402
8

4.) ●●

$280 : 40 = \underline{\hspace{2cm}}$

$16 \cdot 1 = \underline{\hspace{2cm}}$

A 4

7
16

5.) ●●

$370 - 200 = \underline{\hspace{2cm}}$

$400 + 9 = \underline{\hspace{2cm}}$

A 5

170
409

6.) ●●

$240 : \underline{\hspace{1cm}} = 8$

$90 - \underline{\hspace{1cm}} = 74$

A 6

30
16

7.) ●●

$10 \cdot \underline{\hspace{1cm}} = 400$

$12 \cdot \underline{\hspace{1cm}} = 228$

A 7

40
19

8.) ●●

$20 \cdot 20 = \underline{\hspace{2cm}}$

$5 \cdot 44 = \underline{\hspace{2cm}}$

A 8

400
220

9.) ●●

$350 - 320 = \underline{\hspace{2cm}}$

$500 - 200 = \underline{\hspace{2cm}}$

A 9

30
300

10.) ●●

$26 \cdot \underline{\hspace{1cm}} = 702$

$20 \cdot \underline{\hspace{1cm}} = 620$

A 10

27
31

11.) ●●

$17 \cdot 50 = \underline{\hspace{2cm}}$

$600 - 20 = \underline{\hspace{2cm}}$

A 11

850
580

12.) ●●

$\underline{\hspace{1cm}} + 200 = 500$

$360 : 6 = \underline{\hspace{2cm}}$

A 12

300
60

13.) ●●

$\underline{\hspace{1cm}} \cdot 50 = 300$

$591 - 100 = \underline{\hspace{2cm}}$

A 13

6
491

14.) ●●

$\underline{\hspace{1cm}} : 7 = 8$

$\underline{\hspace{1cm}} + 400 = 570$

A 14

56
170

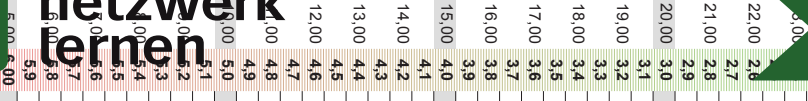
15.) ●●

$813 - \underline{\hspace{1cm}} = 804$

$100 + 470 = \underline{\hspace{2cm}}$

A 15

9
570



Name:
Klasse:

Datum:

1.) ●●

$20 \cdot 11 = \underline{\hspace{2cm}}$

$7 \cdot 57 = \underline{\hspace{2cm}}$

A 1

220
399

2.) ●●

$200 + 40 = \underline{\hspace{2cm}}$

$20 : 10 = \underline{\hspace{2cm}}$

A 2

240
2

3.) ●●

$220 : 22 = \underline{\hspace{2cm}}$

$431 - 64 = \underline{\hspace{2cm}}$

A 3

10
367

4.) ●●

$39 + 44 = \underline{\hspace{2cm}}$

$300 : 1 = \underline{\hspace{2cm}}$

A 4

83
300

5.) ●●

$471 - 3 = \underline{\hspace{2cm}}$

$500 - 100 = \underline{\hspace{2cm}}$

A 5

468
400

6.) ●●

$6 \cdot 31 = \underline{\hspace{2cm}}$

$400 - \underline{\hspace{2cm}} = 170$

A 6

186
230

7.) ●●

$481 - 26 = \underline{\hspace{2cm}}$

$19 \cdot \underline{\hspace{2cm}} = 608$

A 7

455
32

8.) ●●

$600 : 300 = \underline{\hspace{2cm}}$

$170 + \underline{\hspace{2cm}} = 510$

A 8

2
340

9.) ●●

$10 \cdot \underline{\hspace{2cm}} = 270$

$9 \cdot \underline{\hspace{2cm}} = 720$

A 9

27
80

10.) ●●

$700 + \underline{\hspace{2cm}} = 732$

$40 : \underline{\hspace{2cm}} = 5$

A 10

32
8

11.) ●●

$\underline{\hspace{2cm}} \cdot 10 = 300$

$600 - 70 = \underline{\hspace{2cm}}$

A 11

30
530

12.) ●●

$490 : 70 = \underline{\hspace{2cm}}$

$250 : 10 = \underline{\hspace{2cm}}$

A 12

7
25

13.) ●●

$300 : \underline{\hspace{2cm}} = 2$

$200 - 180 = \underline{\hspace{2cm}}$

A 13

150
20

14.) ●●

$\underline{\hspace{2cm}} : 20 = 20$

$\underline{\hspace{2cm}} \cdot 8 = 240$

A 14

400
30

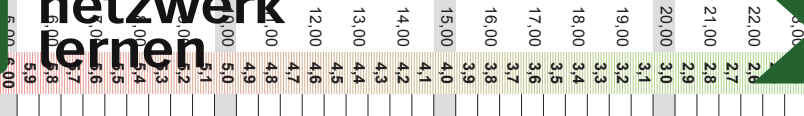
15.) ●●

$870 + 93 = \underline{\hspace{2cm}}$

$500 + 300 = \underline{\hspace{2cm}}$

A 15

963
800



Die vier Grundrechenarten im Zahlenraum 1 000

Code Nr. 50

Nr. 50

Name:
Klasse:

Datum:

1.) ●●	$6 \cdot 1 = \underline{\hspace{2cm}}$	$200 - 80 = \underline{\hspace{2cm}}$	A 1	6 120
2.) ●●	$307 - 50 = \underline{\hspace{2cm}}$	$300 + 180 = \underline{\hspace{2cm}}$	A 2	257 480
3.) ●●	$6 \cdot 57 = \underline{\hspace{2cm}}$	$100 + 400 = \underline{\hspace{2cm}}$	A 3	342 500
4.) ●●	$1 \cdot 20 = \underline{\hspace{2cm}}$	$46 : 2 = \underline{\hspace{2cm}}$	A 4	20 23
5.) ●●	$350 : 25 = \underline{\hspace{2cm}}$	$400 + 130 = \underline{\hspace{2cm}}$	A 5	14 530
6.) ●●	$72 : 9 = \underline{\hspace{2cm}}$	$440 + \underline{\hspace{2cm}} = 450$	A 6	8 10
7.) ●●	$600 - \underline{\hspace{2cm}} = 539$	$7 \cdot 70 = \underline{\hspace{2cm}}$	A 7	61 490
8.) ●●	$600 + 110 = \underline{\hspace{2cm}}$	$90 + 520 = \underline{\hspace{2cm}}$	A 8	710 610
9.) ●●	$500 + 100 = \underline{\hspace{2cm}}$	$600 - 1 = \underline{\hspace{2cm}}$	A 9	600 599
10.) ●●	$215 - \underline{\hspace{2cm}} = 125$	$600 - 40 = \underline{\hspace{2cm}}$	A 10	90 560
11.) ●●	$20 \cdot 10 = \underline{\hspace{2cm}}$	$520 : 130 = \underline{\hspace{2cm}}$	A 11	200 4
12.) ●●	$490 : \underline{\hspace{2cm}} = 49$	$\underline{\hspace{2cm}} : 30 = 26$	A 12	10 780
13.) ●●	$220 : \underline{\hspace{2cm}} = 20$	$100 + \underline{\hspace{2cm}} = 120$	A 13	11 20
14.) ●●	$73 + \underline{\hspace{2cm}} = 143$	$15 \cdot \underline{\hspace{2cm}} = 15$	A 14	70 1
15.) ●●	$7 \cdot 40 = \underline{\hspace{2cm}}$	$420 - 130 = \underline{\hspace{2cm}}$	A 15	280 290

© 2015 Bernhard Storch

erstellt mit RAGTIMEEDU tools



netzwerk
fernen

zur Vollversion