




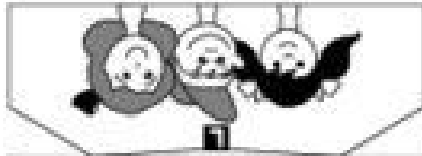













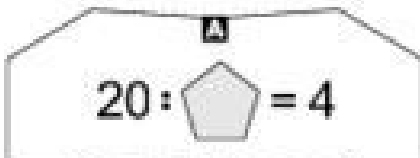
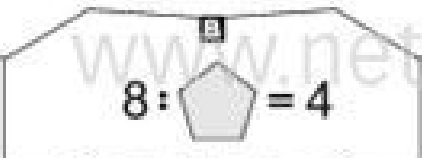
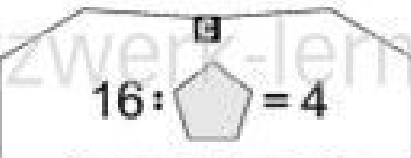
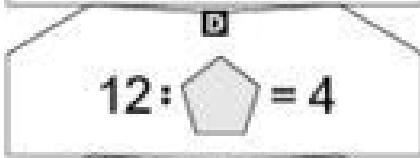
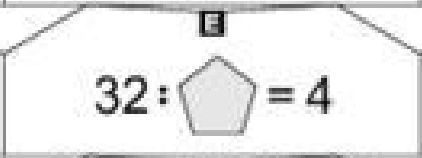
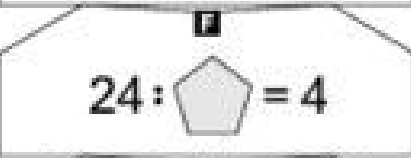
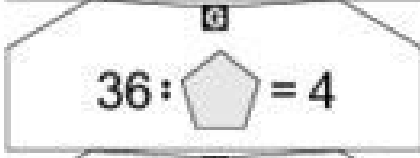
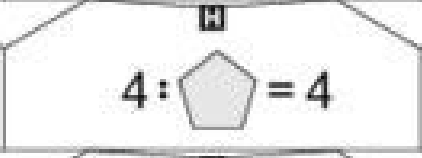
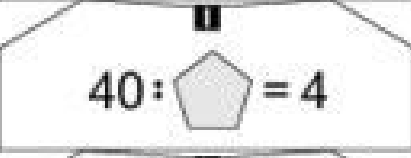




















	
7	
10	
1	
9	
6	
8	
3	
4	
2	
5	

 	 	 $20 : \text{Pentagon} = 4$
 $28 : \text{Pentagon} = 4$	 $36 : \text{Pentagon} = 4$	 $4 : \text{Pentagon} = 4$
 $16 : \text{Pentagon} = 4$	 $24 : \text{Pentagon} = 4$	 $40 : \text{Pentagon} = 4$
 $12 : \text{Pentagon} = 4$	 $32 : \text{Pentagon} = 4$	 $8 : \text{Pentagon} = 4$

 $20 : \text{Pentagon} = 4$	 $8 : \text{Pentagon} = 4$	 $16 : \text{Pentagon} = 4$
 $12 : \text{Pentagon} = 4$	 $32 : \text{Pentagon} = 4$	 $24 : \text{Pentagon} = 4$
 $36 : \text{Pentagon} = 4$	 $4 : \text{Pentagon} = 4$	 $40 : \text{Pentagon} = 4$
 $28 : \text{Pentagon} = 4$	 	 

	2
	8
	3
	10
	6
	4
	1
	9
	7
	5
	
	

## C1 Einmaleins der 4 (Teilaufgaben)

Wie heißt die Lösung?








Lösungen der Rückseite

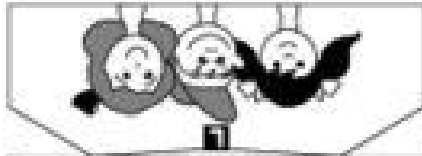



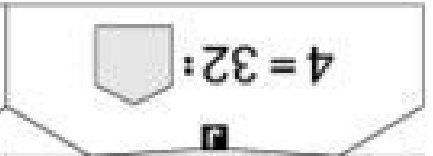





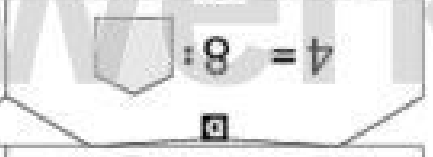



Knicke das Blatt an den drei gestrichelten Linien nach hinten und stelle es so auf:

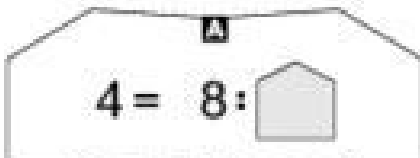
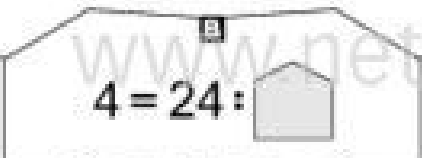
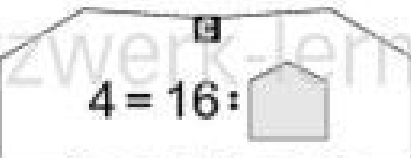



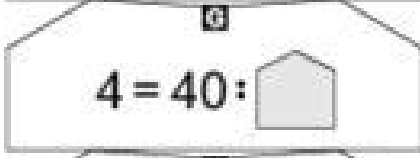
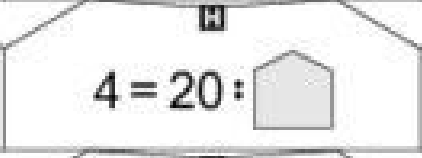
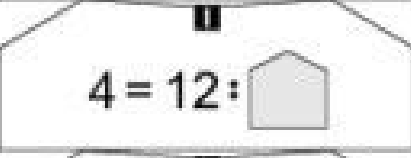
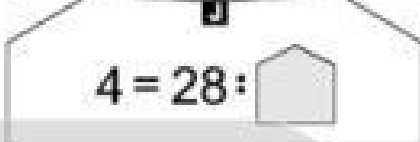




















[www.netzwerk-lernen.de](http://www.netzwerk-lernen.de)

©DBGM angemeldet

	
	
7	
3	
5	
10	
8	
1	
9	
4	
6	
2	

 	 	 $4 = 32 : \square$
 $4 = 4 : \square$	 $4 = 24 : \square$	 $4 = 16 : \square$
 $4 = 36 : \square$	 $4 = 28 : \square$	 $4 = 8 : \square$
 $4 = 40 : \square$	 $4 = 20 : \square$	 $4 = 12 : \square$

 $4 = 8 : \square$	 $4 = 24 : \square$	 $4 = 16 : \square$
 $4 = 36 : \square$	 $4 = 4 : \square$	 $4 = 32 : \square$
 $4 = 40 : \square$	 $4 = 20 : \square$	 $4 = 12 : \square$
 $4 = 28 : \square$	 	 

	3
	5
	10
	2
	7
	9
	4
	6
	1
	8
	
	

## D1 Einmaleins der 4 (Teilaufgaben)

Wie heißt die Lösung?

Lösungen  
der  
Rückseite

Knicke das Blatt  
an den drei gestrichelten Linien  
nach hinten  
und stelle es so auf:



www.netzwerk-lernen.de

©DBGM angemeldet