

Aufgabe ③




_____ + _____ = _____



Lösungsseite

①




3

②



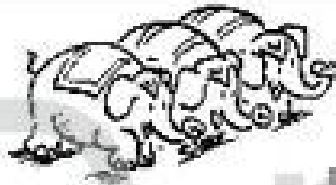
2

③



5

④



+



5

⑤



+



$$3 + 2 = 5$$