
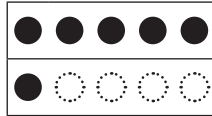



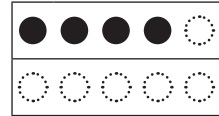
Wie viele sind es? – Zehnerfeld und Zehnerstreifen

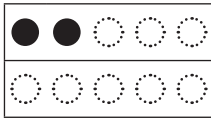
1 Kannst Du ganz schnell sagen, wie viele Punkte im Zehnerfeld angemalt sind?

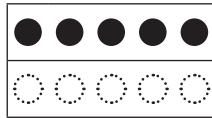







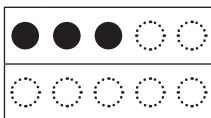


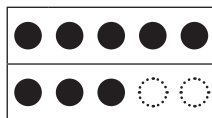


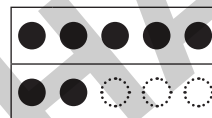


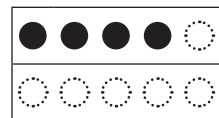













2 Kannst Du auch beim Zehnerstreifen angeben, wie viele Punkte angemalt sind?




















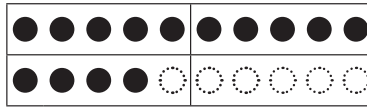


Wie viele sind es? – Zwanzigerfeld und Hunderterfeld


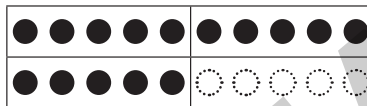
Verbinde die Zwanzigerfelder mit dem passenden Hunderterfeld und der zugehörigen Zahl.




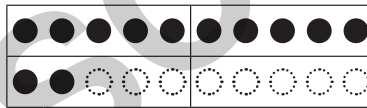
15




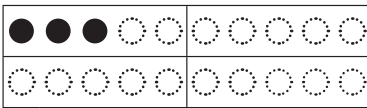
12




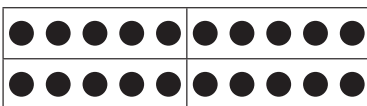
3



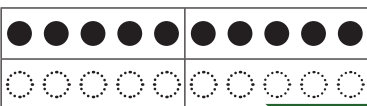
14



10




20

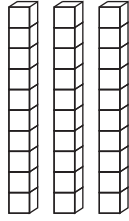


Wie viele Würfel sind es?

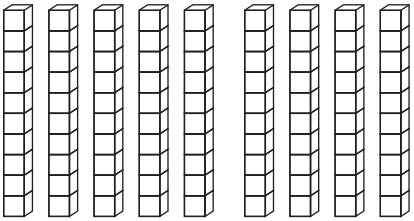
Wie viele Würfel sind es? Auch eine Zehnerstange enthält je 10 Würfel.



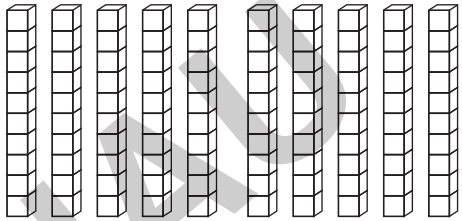
Zehnerstange = Würfel



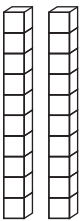
Zehnerstangen = Würfel



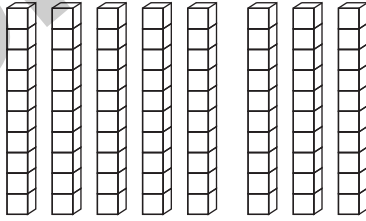
Zehnerstangen = Würfel



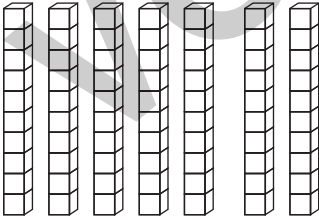
Zehnerstangen = Würfel




Zehnerstangen = Würfel



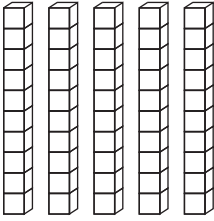
Zehnerstangen = Würfel



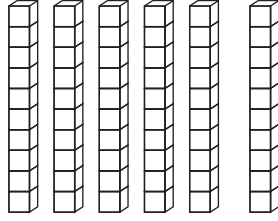
Zehnerstangen = Würfel



Zehnerstangen = Würfel




Zehnerstangen = Würfel



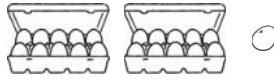
Zehnerstangen = Würfel

Eier: Wie viele sind es?

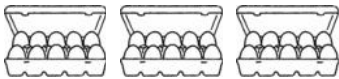
Beim Eierverpacken bleiben einige Eier übrig. Wie viele Eier sind es insgesamt?




Zehnerkartons + Eier = Eier



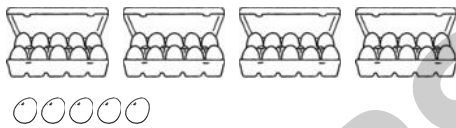
Zehnerkartons + Eier = Eier



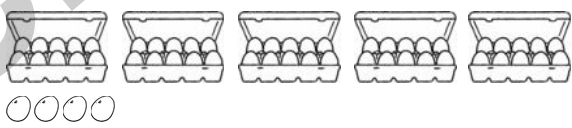
Zehnerkartons + Eier = Eier



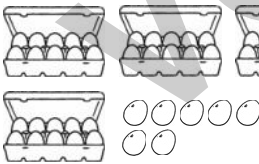
Zehnerkartons + Eier = Eier



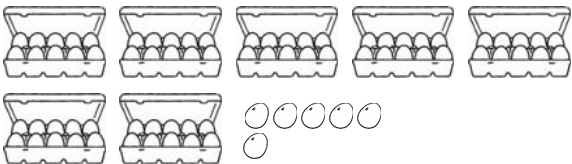
Zehnerkartons + Eier = Eier



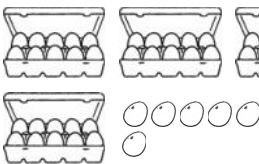
Zehnerkartons + Eier = Eier



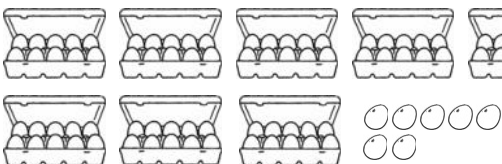
Zehnerkartons + Eier = Eier



Zehnerkartons + Eier = Eier



Zehnerkartons + Eier = Eier



Zehnerkartons + Eier = Eier

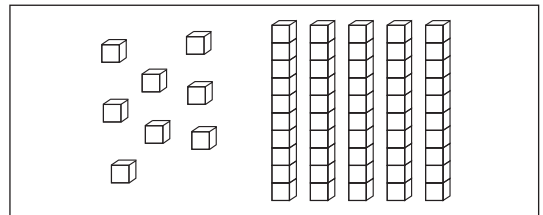
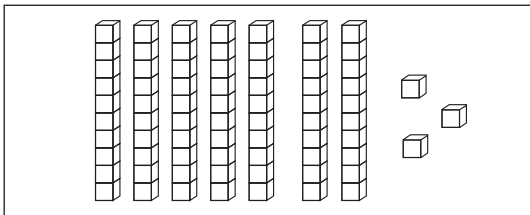
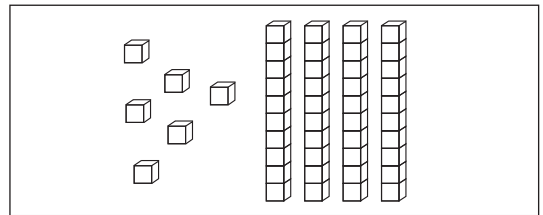
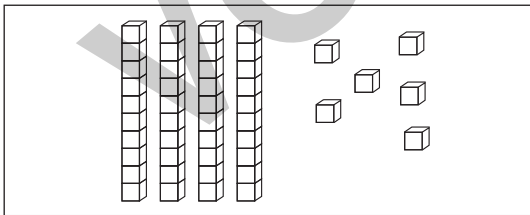
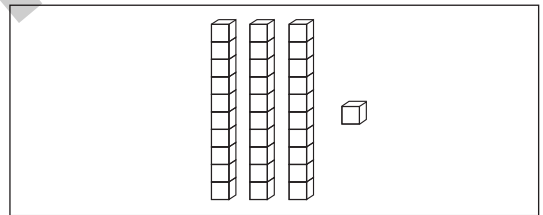
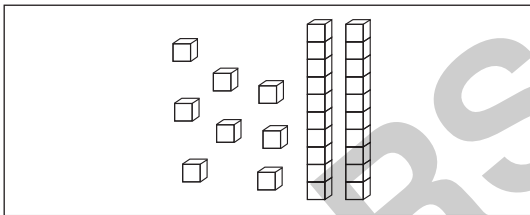
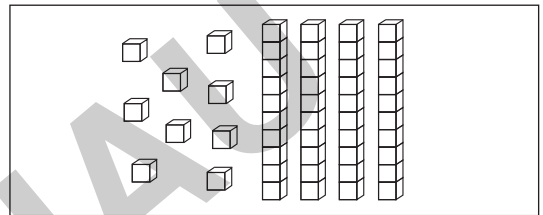
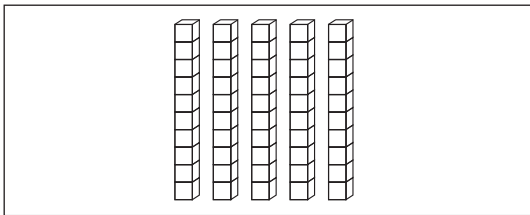
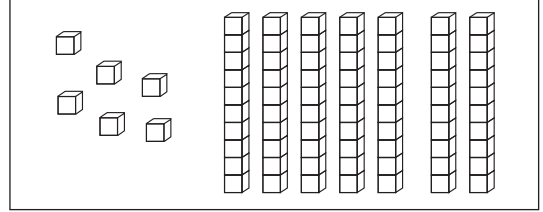
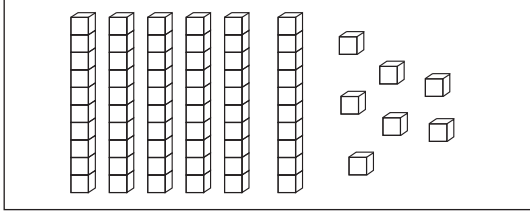
Hunderterfeld: Wie viele sind es?

Ordne die Zahlen dem passenden Bild zu. Welche beiden Zahlen bleiben übrig?

29
32
90
87
23
30
80
78
92
89

Was ist mehr? I

Überlege, was mehr ist. Setze das richtige Zeichen in den Kreis ein (<, >, =).
Suche dann die passenden Zahlen zu den Bildern und überprüfe deine Entscheidung.



Was ist mehr? II

1 Überlege, was mehr ist. Setze das richtige Zeichen in den Kreis ein (<, >, =).

1 Z 3 E	<input type="radio"/>	5 Z 4 E	<input type="radio"/>	4 Z 6 E	<input type="radio"/>	6 E 4 Z
4 E 0 Z	<input type="radio"/>	4 Z 1 E	<input type="radio"/>	3 E 3 Z	<input type="radio"/>	2 Z 8 E
5 Z 0 E	<input type="radio"/>	9 E 0 Z	<input type="radio"/>	4 Z 5 E	<input type="radio"/>	5 Z 4 E
3 E 8 Z	<input type="radio"/>	3 E 8 Z	<input type="radio"/>	9 Z 8 E	<input type="radio"/>	8 Z 9 E
4 Z 5 E	<input type="radio"/>	5 Z 1 E	<input type="radio"/>	3 Z 6 E	<input type="radio"/>	5 E 8 Z
0 E 2 Z	<input type="radio"/>	8 E 0 Z	<input type="radio"/>	3 Z 9 E	<input type="radio"/>	4 Z 0 E

2 Vergleiche die Zahlen, setze das richtige Zeichen ein (<, >, =).

18	<input type="radio"/>	81	32	<input type="radio"/>	28	50	<input type="radio"/>	20
50	<input type="radio"/>	38	28	<input type="radio"/>	82	45	<input type="radio"/>	45
67	<input type="radio"/>	76	67	<input type="radio"/>	66	77	<input type="radio"/>	69
14	<input type="radio"/>	41	31	<input type="radio"/>	14	59	<input type="radio"/>	70

3 Sortiere die Zahlen von der kleinsten bis zur größten.

45	68	11	63	29	86	54	30
<input type="text"/>	<input type="text"/>	1.	<input type="text"/>	2.	<input type="text"/>	<input type="text"/>	<input type="text"/>

47	74	71	19	78	21	91	87
<input type="text"/>	<input type="text"/>	<input type="text"/>	<input type="text"/>	<input type="text"/>	<input type="text"/>	<input type="text"/>	<input type="text"/>

36	63	39	60	93	66	33	99
<input type="text"/>	<input type="text"/>	<input type="text"/>	<input type="text"/>	<input type="text"/>	<input type="text"/>	<input type="text"/>	<input type="text"/>

42	24	44	43	22	34	20	40
<input type="text"/>	<input type="text"/>	<input type="text"/>	<input type="text"/>	<input type="text"/>	<input type="text"/>	<input type="text"/>	<input type="text"/>