

Vorbereitung

Lege ein leeres Blatt rechts neben das Tablet.
Trage dort dann nach und nach deine
Lösungen neben den Aufgabennummern ein.



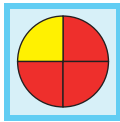
Lösungstabelle

Auf der letzten Seite findest du die richtigen
Lösungen zum Vergleichen.

Zu den Aufgaben



$$\frac{3}{4}$$



Welcher Bruchteil ist rot markiert?

Lösungen

$$\frac{1}{3}$$

8.

$$\frac{2}{3}$$

5.

$$\frac{3}{3}$$

11.

$$\frac{1}{4}$$

10.

$$\frac{2}{4}$$

1.

$$\frac{3}{4}$$

3.

$$\frac{1}{6}$$

9.

$$\frac{2}{6}$$

12.

$$\frac{5}{6}$$

6.

$$\frac{2}{10}$$

2.

$$\frac{4}{10}$$

7.

$$\frac{6}{10}$$

4.

A



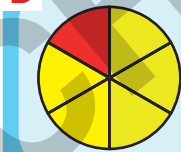
B



C




D



E



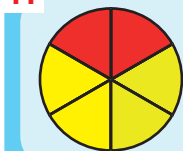
F




G



H



I




J



K



L



Aufgaben

A

B

C

D

E

F

G

H


I

J

K

L

$$\frac{1}{4}$$



Welcher Bruchteil ist blau markiert?

Lösungen

$$\frac{1}{3}$$

7.

$$\frac{2}{3}$$

9.

$$\frac{3}{3}$$

6.

$$\frac{1}{4}$$

12.

$$\frac{2}{4}$$

2.

$$\frac{3}{4}$$

1.

$$\frac{1}{6}$$

3.

$$\frac{4}{6}$$

11.

$$\frac{5}{6}$$

4.

$$\frac{4}{10}$$

10.


$$\frac{6}{10}$$

8.

$$\frac{8}{10}$$

5.

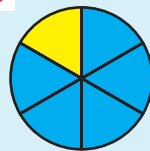
A



B



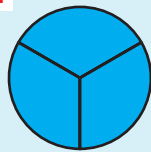
C



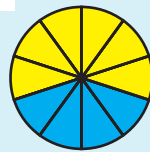
D



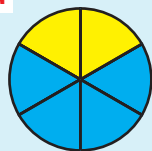
E



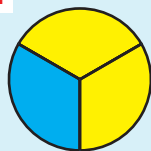
F



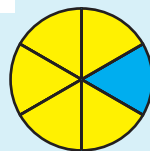
G



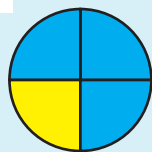
H



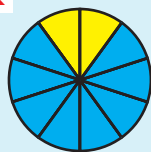
I



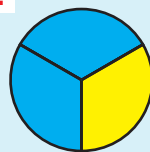
J



K



L



Aufgaben

A

B

C

D

E

F

G

H


I

J

K

L

$$\frac{2}{3}$$



Welcher Bruchteil ist grün markiert?

Lösungen

$$\frac{1}{2}$$

10.

$$\frac{2}{2}$$

9.

$$\frac{1}{3}$$

1.

$$\frac{2}{3}$$

6.

$$\frac{2}{4}$$

7.

$$\frac{3}{4}$$

5.

$$\frac{2}{8}$$

11.

$$\frac{4}{8}$$

2.

$$\frac{5}{8}$$

8.

$$\frac{7}{8}$$

12.


$$\frac{4}{9}$$

4.

$$\frac{5}{9}$$

3.

A



B



C



D




E




F



G



H



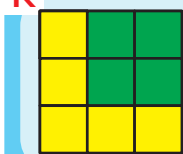
I



J



K



L



Aufgaben

A

B

C

D

E

F

G

H

I

J

K

L

10



$\frac{40}{4}$

Verwandle in eine ganze Zahl!

Lösungen

1 ^{1.}	2 ^{2.}	3 ^{3.}
4 ^{4.}	5 ^{5.}	6 ^{6.}
7 ^{7.}	8 ^{8.}	9 ^{9.}
10 ^{10.}	11 ^{11.}	12 ^{12.}

A $\frac{40}{4}$	B $\frac{10}{5}$	C $\frac{42}{7}$
D $\frac{27}{9}$	E $\frac{22}{2}$	F $\frac{49}{7}$
G $\frac{45}{5}$	H $\frac{9}{9}$	I $\frac{25}{5}$
J $\frac{12}{3}$	K $\frac{24}{2}$	L $\frac{48}{6}$

Aufgaben

A
B
C
D
E
F
G
H
I
J
K
L

$$\frac{9}{12}$$



$$\frac{3}{4}$$

Erweitere
mit 3!

Lösungen

$$\frac{3}{12}$$

12.

$$\frac{9}{12}$$

10.

$$\frac{9}{15}$$

5.

$$\frac{6}{15}$$

6.

$$\frac{3}{18}$$

3.

$$\frac{15}{18}$$

11.

$$\frac{6}{21}$$

1.

$$\frac{9}{21}$$

2.

$$\frac{21}{27}$$

8.

$$\frac{24}{27}$$

9.

$$\frac{27}{30}$$

7.

$$\frac{21}{30}$$

4.

Aufgaben

A

$$\frac{3}{4}$$

B

$$\frac{1}{6}$$

C

$$\frac{9}{10}$$

D

$$\frac{2}{7}$$

E

$$\frac{7}{9}$$

F

$$\frac{3}{5}$$

G

$$\frac{1}{4}$$

H

$$\frac{5}{6}$$

I

$$\frac{7}{10}$$

J

$$\frac{3}{7}$$

K

$$\frac{8}{9}$$

L

$$\frac{2}{5}$$

A

B

C

D

E

F

G

H

I

J

K

L

$$\frac{16}{28}$$

$$\frac{4}{7} = \frac{\quad}{28}$$

Hier musst du erweitern!

Lösungen

Aufgaben

$$\frac{9}{15}$$

8.

$$\frac{12}{15}$$

7.

$$\frac{3}{18}$$

2.

$$\frac{15}{18}$$

1.

$$\frac{12}{28}$$

3.

$$\frac{16}{28}$$

4.

$$\frac{10}{45}$$

12.

$$\frac{40}{45}$$

11.

$$\frac{30}{48}$$

10.

$$\frac{42}{48}$$

9.

$$\frac{63}{90}$$

5.

$$\frac{81}{90}$$

6.

$$\frac{4}{7} = \frac{\quad}{28}$$

A

$$\frac{2}{9} = \frac{\quad}{45}$$

B

$$\frac{3}{5} = \frac{\quad}{15}$$

C

$$\frac{5}{8} = \frac{\quad}{48}$$

D

$$\frac{1}{6} = \frac{\quad}{18}$$

E

$$\frac{9}{10} = \frac{\quad}{90}$$

F

$$\frac{3}{7} = \frac{\quad}{28}$$

G

$$\frac{8}{9} = \frac{\quad}{45}$$

H

$$\frac{4}{5} = \frac{\quad}{15}$$

I

$$\frac{7}{8} = \frac{\quad}{48}$$

J

$$\frac{5}{6} = \frac{\quad}{18}$$

K

$$\frac{7}{10} = \frac{\quad}{90}$$

L

A

B

C

D

E

F

G

H

I

J

K

L

Digitales Lern-Tablet



© michaeljunga@t-online.de

Lösungstabelle

A	12.
B	8.
C	4.
D	2.
E	6.
F	10.
G	11.
H	7.
I	3.
J	1.
K	5.
L	9.