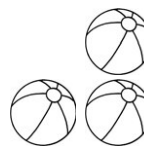
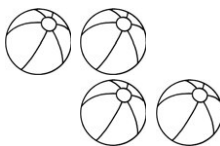








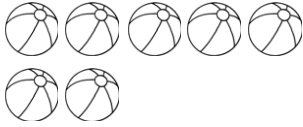
Erkennen kleiner Anzahlen auf einen Blick I

Erkennst Du auf einen Blick, wie viele es sind? Schreibe die Zahlen in die Kästchen.




Wie viele Dinge siehst du? – Anzahlen bis 10

Kannst Du auch hier schon ganz schnell sagen, wie viele Dinge es sind?

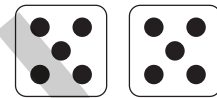

























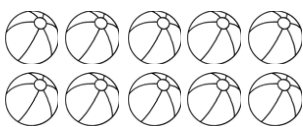










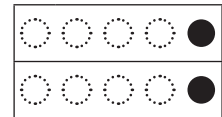
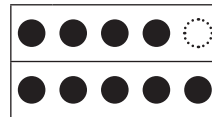

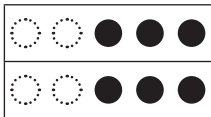
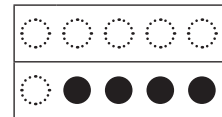
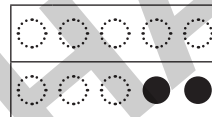


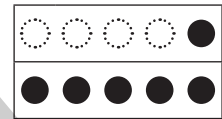
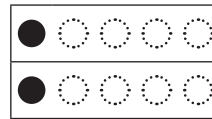
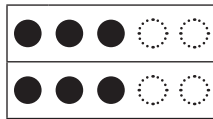
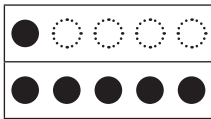
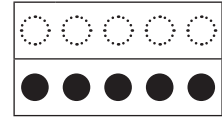
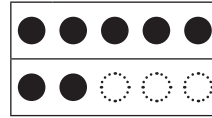

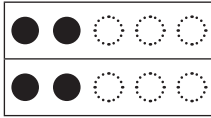






Anzahlen im Zehnerfeld bestimmen

1 Hier sind die Punkte durcheinandergeraten. Erkennst du trotzdem, ohne zu zählen, wie viele es sind?

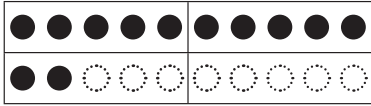


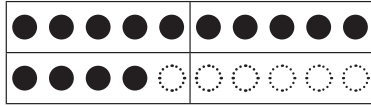
2 Kannst Du auch beim Zehnerstreifen angeben, wie viele Punkte angemalt sind?

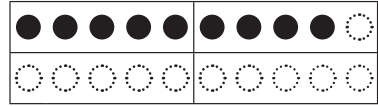


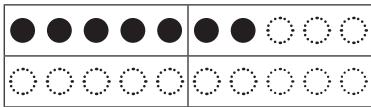
Das Zwanzigerfeld


Kannst Du ganz schnell sagen, wie viele Punkte im Zwanzigerfeld angemalt sind?
Schreibe die Zahlen in die Kästchen.

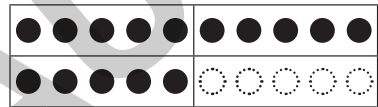


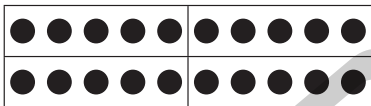


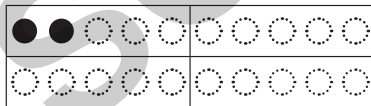


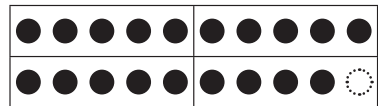


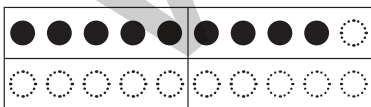


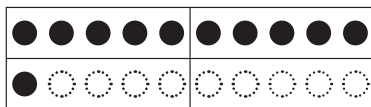


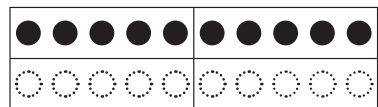


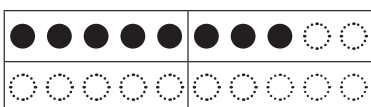


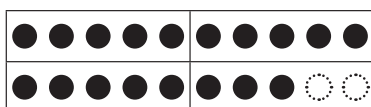


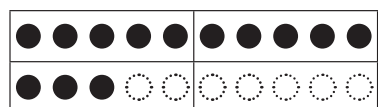












Gemischte Übungen

Hier kannst du nochmal zeigen, dass du die Anzahlen schon richtig erkennst.

