








# Farm animals



When you visit a farm, you can see a lot of animals. For example ponies, sheep, hens, goats and cows.  
Read, fill in the table and find out:

On which farm are fourteen goats?

|  | farm 1 | farm 2 | farm 3 |
|--|--------|--------|--------|
|  ponies |        |        |        |
|  sheep  |        |        |        |
|  hens   |        |        |        |
|  goats  |        |        |        |
|  cows  |        |        |        |

- Next to the farm with the five sheep is a farm with four sheep.
- Next to the farm with the ten hens is a farm with eight hens.
- On farm number one are six ponies.
- The farm with nine goats is on the right next to the farm with the thirteen goats.
- Twelve hens, five sheep and fifteen cows are on the same farm.
- Two cows and thirteen goats are on the same farm.
- Five ponies and ten hens are on the same farm.
- Seven sheep and eleven cows are on the same farm.
- Next to the farm with the six ponies is a farm with three ponies.



# 1 Farm animals

## Farm animals



On a typical farm you can find all sorts of animals. Mostly you can find horses, cows, cocks, donkeys and lambs. But also little piglets live on farms. Read, fill in the table and find out:

On which farm are eight piglets?

|                | farm 1 | farm 2 | farm 3 |
|----------------|--------|--------|--------|
| <b>horses</b>  |        |        |        |
| <b>cows</b>    |        |        |        |
| <b>donkeys</b> |        |        |        |
| <b>lambs</b>   |        |        |        |
| <b>piglets</b> |        |        |        |
| <b>cocks</b>   |        |        |        |

1. One lamb and four donkeys are on the same farm.
2. Ten piglets and two cocks are on the same farm.
3. On the farm next to the one with two horses is a farm with five horses.
4. There are two cows on the third farm.
5. Next to the farm with six donkeys is a farm with three donkeys.
6. There are four cows on the farm next to the farm with two cows.
7. Six lambs and one cock are on the same farm.
8. Next to the farm with ten piglets is a farm with seven piglets.
9. Six donkeys and four lambs are on the same farm with one horse.
10. On one farm there are three cows and two horses.
11. To the right of the farm with one cock is a farm with three cocks.





## Farm animals




When you visit a farm, you can see a lot of animals. For example ponies, sheep, hens, goats and cows. Read, fill in the table and find out:

On which farm are fourteen goats? On farm 1

Possible solution: 3 – 9 – 7 – 2 – 5 – 1 – 8 – 6 – 4

|        | farm 1 | farm 2 | farm 3 |
|--------|--------|--------|--------|
| ponies | 6      | 3      | 5      |
| sheep  | 5      | 4      | 7      |
| hens   | 12     | 8      | 10     |
| goats  | 14     | 13     | 9      |
| cows   | 15     | 2      | 11     |

3. On farm number one are six ponies.
9. Next to the farm with the six ponies is a farm with three ponies.
7. Five ponies and ten hens are on the same farm.
2. Next to the farm with the ten hens is a farm with eight hens.
5. Twelve hens, five sheep and fifteen cows are on the same farm.
1. Next to the farm with the five sheep is a farm with four sheep.
8. Seven sheep and eleven cows are on the same farm.
6. Two cows and thirteen goats are on the same farm.
4. The farm with nine goats is on the right next to the farm with the thirteen goats.



## Farm animals




On a typical farm you can find all sorts of animals. Mostly you can find horses, cows, cocks, donkeys and lambs. But also little piglets live on farms. Read, fill in the table and find out:

On which farm are eight piglets? On farm 3

Possible solution: 4 – 6 – 10 – 3 – 9 – 5 – 1 – 7 – 11 – 2 – 8

|         | farm 1 | farm 2 | farm 3 |
|---------|--------|--------|--------|
| horses  | 2      | 5      | 1      |
| cows    | 3      | 4      | 2      |
| donkeys | 4      | 3      | 6      |
| lambs   | 1      | 6      | 4      |
| piglets | 10     | 7      | 8      |
| cocks   | 2      | 1      | 3      |

4. There are two cows on the third farm.
6. There are four cows on the farm next to the farm with two cows.
10. On one farm there are three cows and two horses.
3. On the farm next to the one with two horses is a farm with five horses.
9. Six donkeys and four lambs are on the same farm with one horse.
5. Next to the farm with six donkeys is a farm with three donkeys.
1. One lamb and four donkeys are on the same farm.
7. Six lambs and one cock are on the same farm.
11. To the right of the farm with one cock is a farm with three cocks.
2. Ten piglets and two cocks are on the same farm.
8. Next to the farm with ten piglets is a farm with seven piglets.







# Fruit




These bowls are filled with a lot of fruits. There are different numbers of grapefruits, lemons, plums and strawberries in each bowl. Read, draw and find out:


In which bowl are three strawberries?




bowl 1



bowl 2




bowl 3



bowl 4

1. The bowl with two lemons is between the bowl with five lemons and the bowl with one lemon.
2. Three grapefruits and five lemons are in the same bowl.
3. The bowl with four strawberries is not next to the bowl with one strawberry.
4. One plum and two strawberries are in the same bowl.
5. The bowl with one strawberry is next to the bowl with two strawberries.
6. There is one grapefruit in the first bowl.
7. Three lemons and three plums are in the same bowl.
8. The bowl with four grapefruits is between the bowl with one grapefruit and the bowl with two grapefruits.
9. Between the bowl with two plums and the bowl with three plums is a bowl with four plums.






# Fruit




When people buy fruit, they put the fruit in bowls at home. So everybody can see it and choose whatever they like. Here are pineapples, cherries, raspberries, pears and peaches in each bowl. But how many of each sort? Read, draw and find out:




In which bowl are two pears? \_\_\_\_\_




**bowl 1**



**bowl 2**



**bowl 3**



**bowl 4**



1. The bowl with five raspberries is between the bowl with three raspberries and the bowl with two raspberries.

2. Three pineapples and one peach are in the same bowl.

3. The bowl with two pineapples and one pear is next to the bowl with four pineapples.

4. Two cherries and three raspberries are in the same bowl.

5. In bowl number four is one cherry.

6. Four peaches and three pears are in the same bowl.

7. Next to the bowl with one pineapple is a bowl with four pineapples.

8. The bowl with four pears is not next to the bowl with the three pears.

9. Four raspberries and one pineapple are in the same bowl.

10. The bowl with three cherries is between the bowl with one cherry and the bowl with four cherries.

11. The bowl with three peaches is between the bowl with one peach and the bowl with two peaches.