

Subtraktion im Zahlenraum 10 000

Code Nr. 1

Nr. 1

Name,
Klasse:

Datum:

1.) ●●	$1\ 081 - 180 = \underline{\hspace{2cm}}$	$4\ 000 - 540 = \underline{\hspace{2cm}}$	A 1	901 3460
2.) ●●	$3\ 404 - 1\ 000 = \underline{\hspace{2cm}}$	$4\ 200 - 300 = \underline{\hspace{2cm}}$	A 2	2404 3900
3.) ●●	$1\ 300 - 30 = \underline{\hspace{2cm}}$	$2\ 000 - 490 = \underline{\hspace{2cm}}$	A 3	1270 1510
4.) ●●	$2\ 246 - 1\ 300 = \underline{\hspace{2cm}}$	$833 - 700 = \underline{\hspace{2cm}}$	A 4	946 133
5.) ●●	$4\ 050 - 1\ 600 = \underline{\hspace{2cm}}$	$1\ 426 - 900 = \underline{\hspace{2cm}}$	A 5	2450 526
6.) ●●	$5\ 000 - \underline{\hspace{2cm}} = 4050$	$3\ 800 - \underline{\hspace{2cm}} = 2100$	A 6	950 1 700
7.) ●●	$5\ 100 - \underline{\hspace{2cm}} = 4400$	$5\ 310 - 560 = \underline{\hspace{2cm}}$	A 7	700 4750
8.) ●●	$2\ 630 - 700 = \underline{\hspace{2cm}}$	$3\ 707 - \underline{\hspace{2cm}} = 3207$	A 8	1930 500
9.) ●●	$6\ 136 - \underline{\hspace{2cm}} = 5906$	$6\ 388 - 600 = \underline{\hspace{2cm}}$	A 9	230 5788
10.) ●●	$5\ 386 - \underline{\hspace{2cm}} = 4586$	$4\ 368 - 130 = \underline{\hspace{2cm}}$	A 10	800 4238
11.) ●●	$1\ 800 - \underline{\hspace{2cm}} = 300$	$6\ 200 - \underline{\hspace{2cm}} = 6110$	A 11	1 500 90
12.) ●●	$3\ 000 - 860 = \underline{\hspace{2cm}}$	$3\ 000 - \underline{\hspace{2cm}} = 2000$	A 12	2140 1 000
13.) ●●	$\underline{\hspace{2cm}} - 540 = 1882$	$\underline{\hspace{2cm}} - 2\ 000 = 4000$	A 13	2 422 6 000
14.) ●●	$4\ 900 - \underline{\hspace{2cm}} = 4500$	$\underline{\hspace{2cm}} - 300 = 5200$	A 14	400 5 500
15.) ●●	$3\ 039 - \underline{\hspace{2cm}} = 2039$	$8\ 100 - 1\ 300 = \underline{\hspace{2cm}}$	A 15	1 000 6800

© 2015 Bernhard Storch

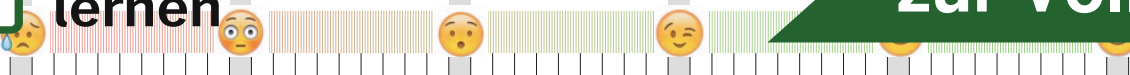
erstellt mit RAGTIME EDU tools



netzwerk
lernen

Vergleiche mit dem Lösungstreifen und markiere hier, wie du

zur Vollversion



Subtraktion im Zahlenraum 10 000

Code Nr. 2

Nr. 2

Name:
Klasse:

Datum:

1.) ●●

$3\ 127 - 800 = \underline{\hspace{2cm}}$

$682 - 300 = \underline{\hspace{2cm}}$

A 1

2327
382

2.) ●●

$2\ 000 - 1\ 400 = \underline{\hspace{2cm}}$

$2\ 205 - 2\ 000 = \underline{\hspace{2cm}}$

A 2

600
205

3.) ●●

$4\ 000 - 220 = \underline{\hspace{2cm}}$

$3\ 044 - 400 = \underline{\hspace{2cm}}$

A 3

3780
2644

4.) ●●

$4\ 330 - 700 = \underline{\hspace{2cm}}$

$3\ 000 - 2\ 200 = \underline{\hspace{2cm}}$

A 4

3630
800

5.) ●●

$3\ 817 - 1\ 000 = \underline{\hspace{2cm}}$

$3\ 218 - 3\ 000 = \underline{\hspace{2cm}}$

A 5

2817
218

6.) ●●

$3\ 228 - \underline{\hspace{2cm}} = 2228$

$1\ 900 - \underline{\hspace{2cm}} = 1700$

A 6

1 000
200

7.) ●●

$4\ 150 - 1\ 000 = \underline{\hspace{2cm}}$

$5\ 000 - \underline{\hspace{2cm}} = 3000$

A 7

3150
2 000

8.) ●●

$6\ 068 - 900 = \underline{\hspace{2cm}}$

$2\ 000 - 940 = \underline{\hspace{2cm}}$

A 8

5168
1060

9.) ●●

$3\ 900 - 1\ 700 = \underline{\hspace{2cm}}$

$4\ 100 - 2\ 600 = \underline{\hspace{2cm}}$

A 9

2200
1500

10.) ●●

$5\ 511 - \underline{\hspace{2cm}} = 4511$

$3\ 378 - 1\ 500 = \underline{\hspace{2cm}}$

A 10

1 000
1878

11.) ●●

$4\ 115 - 360 = \underline{\hspace{2cm}}$

$\underline{\hspace{2cm}} - 1\ 000 = 1299$

A 11

3755
2 299

12.) ●●

$\underline{\hspace{2cm}} - 2\ 000 = 3000$

$2\ 000 - 900 = \underline{\hspace{2cm}}$

A 12

5 000
1100

13.) ●●

$6\ 179 - 400 = \underline{\hspace{2cm}}$

$6\ 547 - \underline{\hspace{2cm}} = 4347$

A 13

5779
2 200

14.) ●●

$\underline{\hspace{2cm}} - 570 = 5798$

$7\ 841 - 1\ 300 = \underline{\hspace{2cm}}$

A 14

6 368
6541

15.) ●●

$5\ 620 - \underline{\hspace{2cm}} = 1720$

$\underline{\hspace{2cm}} - 4\ 900 = 100$

A 15

3 900
5 000

© 2015 Bernhard Storch


erstellt mit RAGTIME EDU tools



netzwerk
lernen

Vergleiche mit dem Lösungstreifen und markiere hier, wie du

zur Vollversion



Subtraktion im Zahlenraum 10 000

Code Nr. 3

Nr. 3

Name:
Klasse:

Datum:

1.) ●●	$892 - 300 = \underline{\hspace{2cm}}$	$4\ 000 - 10 = \underline{\hspace{2cm}}$	A 1	592 3990
2.) ●●	$2\ 000 - 280 = \underline{\hspace{2cm}}$	$3\ 000 - 1\ 100 = \underline{\hspace{2cm}}$	A 2	1720 1900
3.) ●●	$3\ 000 - 1\ 000 = \underline{\hspace{2cm}}$	$1\ 226 - 70 = \underline{\hspace{2cm}}$	A 3	2000 1156
4.) ●●	$3\ 007 - 1\ 100 = \underline{\hspace{2cm}}$	$4\ 000 - 1\ 000 = \underline{\hspace{2cm}}$	A 4	1907 3000
5.) ●●	$2\ 000 - 270 = \underline{\hspace{2cm}}$	$3\ 394 - 1\ 000 = \underline{\hspace{2cm}}$	A 5	1730 2394
6.) ●●	$3\ 300 - 1\ 000 = \underline{\hspace{2cm}}$	$3\ 000 - \underline{\hspace{2cm}} = 2400$	A 6	2300 600
7.) ●●	$3\ 623 - 2\ 000 = \underline{\hspace{2cm}}$	$3\ 900 - 2\ 000 = \underline{\hspace{2cm}}$	A 7	1623 1900
8.) ●●	$2\ 266 - 2\ 000 = \underline{\hspace{2cm}}$	$1\ 150 - \underline{\hspace{2cm}} = 750$	A 8	266 400
9.) ●●	$6\ 212 - 540 = \underline{\hspace{2cm}}$	$3\ 065 - 2\ 100 = \underline{\hspace{2cm}}$	A 9	5672 965
10.) ●●	$2\ 036 - \underline{\hspace{2cm}} = 436$	$5\ 000 - \underline{\hspace{2cm}} = 4090$	A 10	1\ 600 910
11.) ●●	$7\ 000 - \underline{\hspace{2cm}} = 6600$	$4\ 239 - \underline{\hspace{2cm}} = 3589$	A 11	400 650
12.) ●●	$5\ 927 - \underline{\hspace{2cm}} = 4927$	$6\ 000 - 110 = \underline{\hspace{2cm}}$	A 12	1\ 000 5890
13.) ●●	$3\ 400 - \underline{\hspace{2cm}} = 400$	$\underline{\hspace{2cm}} - 1\ 000 = 5000$	A 13	3\ 000 6\ 000
14.) ●●	$6\ 247 - \underline{\hspace{2cm}} = 4647$	$\underline{\hspace{2cm}} - 2\ 000 = 4200$	A 14	1\ 600 6\ 200
15.) ●●	$7\ 052 - 550 = \underline{\hspace{2cm}}$	$5\ 224 - 500 = \underline{\hspace{2cm}}$	A 15	6502 4724

© 2015 Bernhard Storch


erstellt mit RAGTIME EDU tools



netzwerk
lernen

Vergleiche mit dem Lösungstreifen und markiere hier, wie du

zur Vollversion



Subtraktion im Zahlenraum 10 000

Code Nr. 26

Nr. 26

Name:
Klasse:

Datum:

1.) ●●	$417 - 310 = \underline{\hspace{2cm}}$	$3\ 010 - 200 = \underline{\hspace{2cm}}$	A 1	107 2810
2.) ●●	$3\ 072 - 700 = \underline{\hspace{2cm}}$	$2\ 800 - 70 = \underline{\hspace{2cm}}$	A 2	2372 2730
3.) ●●	$4\ 000 - 900 = \underline{\hspace{2cm}}$	$3\ 300 - 620 = \underline{\hspace{2cm}}$	A 3	3100 2680
4.) ●●	$3\ 400 - 2\ 000 = \underline{\hspace{2cm}}$	$5\ 000 - 800 = \underline{\hspace{2cm}}$	A 4	1400 4200
5.) ●●	$3\ 007 - 2\ 000 = \underline{\hspace{2cm}}$	$4\ 513 - 110 = \underline{\hspace{2cm}}$	A 5	1007 4403
6.) ●●	$2\ 100 - \underline{\hspace{2cm}} = 1100$	$3\ 000 - 800 = \underline{\hspace{2cm}}$	A 6	1\ 000 2200
7.) ●●	$1\ 200 - \underline{\hspace{2cm}} = 1180$	$6\ 000 - \underline{\hspace{2cm}} = 5600$	A 7	20 400
8.) ●●	$5\ 041 - 1\ 900 = \underline{\hspace{2cm}}$	$1\ 300 - 200 = \underline{\hspace{2cm}}$	A 8	3141 1100
9.) ●●	$6\ 000 - 800 = \underline{\hspace{2cm}}$	$2\ 000 - 360 = \underline{\hspace{2cm}}$	A 9	5200 1640
10.) ●●	$4\ 000 - \underline{\hspace{2cm}} = 3330$	$3\ 700 - 3\ 300 = \underline{\hspace{2cm}}$	A 10	670 400
11.) ●●	$7\ 000 - \underline{\hspace{2cm}} = 6300$	$7\ 000 - \underline{\hspace{2cm}} = 6100$	A 11	700 900
12.) ●●	$\underline{\hspace{2cm}} - 2\ 500 = 644$	$7\ 000 - 80 = \underline{\hspace{2cm}}$	A 12	3\ 144 6920
13.) ●●	$5\ 487 - 2\ 300 = \underline{\hspace{2cm}}$	$4\ 800 - 300 = \underline{\hspace{2cm}}$	A 13	3187 4500
14.) ●●	$4\ 000 - 3\ 000 = \underline{\hspace{2cm}}$	$\underline{\hspace{2cm}} - 160 = 7840$	A 14	1000 8\ 000
15.) ●●	$\underline{\hspace{2cm}} - 2\ 300 = 5093$	$3\ 932 - 200 = \underline{\hspace{2cm}}$	A 15	7\ 393 3732

© 2015 Bernhard Storch


erstellt mit RAGTIME EDU tools



netzwerk
lernen

Vergleiche mit dem Lösungstreifen und markiere hier, wie du

zur Vollversion



Subtraktion im Zahlenraum 10 000

Code Nr. 27

Nr. 27

Name,
Klasse:

Datum:

1.) ●●	$3\ 000 - 1\ 200 = \underline{\hspace{2cm}}$	$2\ 039 - 1\ 300 = \underline{\hspace{2cm}}$	A 1	1800 739
2.) ●●	$2\ 601 - 2\ 000 = \underline{\hspace{2cm}}$	$3\ 600 - 400 = \underline{\hspace{2cm}}$	A 2	601 3200
3.) ●●	$2\ 000 - 330 = \underline{\hspace{2cm}}$	$2\ 900 - 1\ 300 = \underline{\hspace{2cm}}$	A 3	1670 1600
4.) ●●	$5\ 000 - 800 = \underline{\hspace{2cm}}$	$2\ 400 - 1\ 000 = \underline{\hspace{2cm}}$	A 4	4200 1400
5.) ●●	$4\ 000 - 1\ 400 = \underline{\hspace{2cm}}$	$4\ 138 - 1\ 000 = \underline{\hspace{2cm}}$	A 5	2600 3138
6.) ●●	$3\ 086 - \underline{\hspace{2cm}} = 2366$	$2\ 000 - 200 = \underline{\hspace{2cm}}$	A 6	720 1800
7.) ●●	$5\ 000 - 800 = \underline{\hspace{2cm}}$	$4\ 497 - \underline{\hspace{2cm}} = 3497$	A 7	4200 1\ 000
8.) ●●	$4\ 400 - 1\ 000 = \underline{\hspace{2cm}}$	$2\ 900 - \underline{\hspace{2cm}} = 2210$	A 8	3400 690
9.) ●●	$3\ 109 - \underline{\hspace{2cm}} = 2779$	$830 - \underline{\hspace{2cm}} = 430$	A 9	330 400
10.) ●●	$2\ 246 - 740 = \underline{\hspace{2cm}}$	$2\ 333 - 1\ 500 = \underline{\hspace{2cm}}$	A 10	1506 833
11.) ●●	$5\ 228 - \underline{\hspace{2cm}} = 2228$	$\underline{\hspace{2cm}} - 2\ 600 = 1500$	A 11	3\ 000 4\ 100
12.) ●●	$5\ 700 - \underline{\hspace{2cm}} = 3700$	$\underline{\hspace{2cm}} - 2\ 400 = 2600$	A 12	2\ 000 5\ 000
13.) ●●	$5\ 641 - \underline{\hspace{2cm}} = 3841$	$\underline{\hspace{2cm}} - 1\ 000 = 1000$	A 13	1\ 800 2\ 000
14.) ●●	$\underline{\hspace{2cm}} - 2\ 000 = 159$	$5\ 000 - \underline{\hspace{2cm}} = 4140$	A 14	2\ 159 860
15.) ●●	$7\ 000 - 1\ 100 = \underline{\hspace{2cm}}$	$7\ 500 - 290 = \underline{\hspace{2cm}}$	A 15	5900 7210

© 2015 Bernhard Storch


erstellt mit RAGTIME EDU tools



netzwerk
lernen

Vergleiche mit dem Lösungstreifen und markiere hier, wie du

zur Vollversion



Subtraktion im Zahlenraum 10 000

Code Nr. 28

Nr. 28

Name:
Klasse:

Datum:

1.) ●●	$3\ 500 - 300 = \underline{\hspace{2cm}}$	$800 - 700 = \underline{\hspace{2cm}}$	A 1	3200 100
2.) ●●	$4\ 000 - 200 = \underline{\hspace{2cm}}$	$1\ 200 - 560 = \underline{\hspace{2cm}}$	A 2	3800 640
3.) ●●	$4\ 223 - 400 = \underline{\hspace{2cm}}$	$2\ 301 - 220 = \underline{\hspace{2cm}}$	A 3	3823 2081
4.) ●●	$3\ 500 - 1\ 500 = \underline{\hspace{2cm}}$	$2\ 349 - 230 = \underline{\hspace{2cm}}$	A 4	2000 2119
5.) ●●	$3\ 505 - 1\ 500 = \underline{\hspace{2cm}}$	$2\ 000 - 1\ 600 = \underline{\hspace{2cm}}$	A 5	2005 400
6.) ●●	$4\ 495 - \underline{\hspace{2cm}} = 3895$	$1\ 513 - 1\ 000 = \underline{\hspace{2cm}}$	A 6	600 513
7.) ●●	$2\ 850 - 2\ 000 = \underline{\hspace{2cm}}$	$3\ 000 - 1\ 600 = \underline{\hspace{2cm}}$	A 7	850 1400
8.) ●●	$4\ 700 - 1\ 300 = \underline{\hspace{2cm}}$	$4\ 233 - 2\ 300 = \underline{\hspace{2cm}}$	A 8	3400 1933
9.) ●●	$2\ 260 - \underline{\hspace{2cm}} = 2060$	$4\ 000 - 17 = \underline{\hspace{2cm}}$	A 9	200 3983
10.) ●●	$1\ 846 - 1\ 000 = \underline{\hspace{2cm}}$	$2\ 298 - \underline{\hspace{2cm}} = 1298$	A 10	846 1 000
11.) ●●	$5\ 174 - \underline{\hspace{2cm}} = 2574$	$\underline{\hspace{2cm}} - 3\ 000 = 0$	A 11	2 600 3 000
12.) ●●	$\underline{\hspace{2cm}} - 3\ 500 = 709$	$\underline{\hspace{2cm}} - 1\ 000 = 4000$	A 12	4 209 5 000
13.) ●●	$3\ 800 - \underline{\hspace{2cm}} = 2400$	$\underline{\hspace{2cm}} - 800 = 7027$	A 13	1 400 7 827
14.) ●●	$\underline{\hspace{2cm}} - 2\ 400 = 3201$	$5\ 500 - \underline{\hspace{2cm}} = 2800$	A 14	5 601 2 700
15.) ●●	$5\ 113 - \underline{\hspace{2cm}} = 4913$	$3\ 000 - \underline{\hspace{2cm}} = 200$	A 15	200 2 800

© 2015 Bernhard Storch


erstellt mit RAGTIME EDU tools



netzwerk
lernen

Vergleiche mit dem Lösungstreifen und markiere hier, wie du

zur Vollversion



Subtraktion im Zahlenraum 10 000

Code Nr. 48

Nr. 48

Name,
Klasse:

Datum:

1.) ●●	$4\ 000 - 360 = \underline{\hspace{2cm}}$	$2\ 843 - 1\ 400 = \underline{\hspace{2cm}}$	A 1	3640 1443
2.) ●●	$4\ 100 - 400 = \underline{\hspace{2cm}}$	$2\ 173 - 1\ 200 = \underline{\hspace{2cm}}$	A 2	3700 973
3.) ●●	$4\ 300 - 350 = \underline{\hspace{2cm}}$	$2\ 000 - 1\ 600 = \underline{\hspace{2cm}}$	A 3	3950 400
4.) ●●	$2\ 300 - 700 = \underline{\hspace{2cm}}$	$4\ 000 - 900 = \underline{\hspace{2cm}}$	A 4	1600 3100
5.) ●●	$5\ 072 - 100 = \underline{\hspace{2cm}}$	$3\ 011 - 1\ 600 = \underline{\hspace{2cm}}$	A 5	4972 1411
6.) ●●	$2\ 040 - \underline{\hspace{2cm}} = 2010$	$2\ 072 - \underline{\hspace{2cm}} = 1072$	A 6	30 1 000
7.) ●●	$5\ 322 - \underline{\hspace{2cm}} = 4552$	$4\ 000 - \underline{\hspace{2cm}} = 1000$	A 7	770 3 000
8.) ●●	$4\ 800 - 100 = \underline{\hspace{2cm}}$	$4\ 000 - \underline{\hspace{2cm}} = 2000$	A 8	4700 2 000
9.) ●●	$5\ 517 - 48 = \underline{\hspace{2cm}}$	$2\ 067 - 1\ 700 = \underline{\hspace{2cm}}$	A 9	5469 367
10.) ●●	$6\ 000 - \underline{\hspace{2cm}} = 5820$	$4\ 462 - \underline{\hspace{2cm}} = 2462$	A 10	180 2 000
11.) ●●	$3\ 000 - \underline{\hspace{2cm}} = 1000$	$\underline{\hspace{2cm}} - 2\ 100 = 1900$	A 11	2 000 4 000
12.) ●●	$6\ 000 - \underline{\hspace{2cm}} = 5800$	$\underline{\hspace{2cm}} - 2\ 500 = 1632$	A 12	200 4 132
13.) ●●	$2\ 225 - \underline{\hspace{2cm}} = 1825$	$3\ 231 - 3\ 000 = \underline{\hspace{2cm}}$	A 13	400 231
14.) ●●	$4\ 227 - \underline{\hspace{2cm}} = 1127$	$\underline{\hspace{2cm}} - 600 = 5400$	A 14	3 100 6 000
15.) ●●	$7\ 000 - \underline{\hspace{2cm}} = 6780$	$\underline{\hspace{2cm}} - 3\ 000 = 2048$	A 15	220 5 048

© 2015 Bernhard Storch

erstellt mit RAGTIME EDU tools



netzwerk
fernen

zur Vollversion

Subtraktion im Zahlenraum 10 000

Code Nr. 49

Nr. 49

Name:
Klasse:

Datum:

1.) ●●	$3\ 000 - 800 = \underline{\hspace{2cm}}$	$1\ 628 - 13 = \underline{\hspace{2cm}}$	A 1	2200 1615
2.) ●●	$2\ 400 - 1\ 400 = \underline{\hspace{2cm}}$	$2\ 000 - 600 = \underline{\hspace{2cm}}$	A 2	1000 1400
3.) ●●	$2\ 033 - 1\ 000 = \underline{\hspace{2cm}}$	$1\ 736 - 510 = \underline{\hspace{2cm}}$	A 3	1033 1226
4.) ●●	$2\ 000 - 2\ 000 = \underline{\hspace{2cm}}$	$4\ 000 - 150 = \underline{\hspace{2cm}}$	A 4	0 3850
5.) ●●	$623 - 600 = \underline{\hspace{2cm}}$	$4\ 700 - 400 = \underline{\hspace{2cm}}$	A 5	23 4300
6.) ●●	$2\ 209 - 1\ 300 = \underline{\hspace{2cm}}$	$5\ 000 - \underline{\hspace{2cm}} = 3600$	A 6	909 1 400
7.) ●●	$6\ 000 - \underline{\hspace{2cm}} = 5920$	$5\ 435 - \underline{\hspace{2cm}} = 4935$	A 7	80 500
8.) ●●	$5\ 488 - 400 = \underline{\hspace{2cm}}$	$2\ 200 - \underline{\hspace{2cm}} = 1500$	A 8	5088 700
9.) ●●	$3\ 237 - \underline{\hspace{2cm}} = 237$	$4\ 605 - \underline{\hspace{2cm}} = 3605$	A 9	3 000 1 000
10.) ●●	$2\ 351 - \underline{\hspace{2cm}} = 1351$	$6\ 916 - 630 = \underline{\hspace{2cm}}$	A 10	1 000 6286
11.) ●●	$1\ 346 - 610 = \underline{\hspace{2cm}}$	$\underline{\hspace{2cm}} - 2\ 000 = 4000$	A 11	736 6 000
12.) ●●	$5\ 000 - 740 = \underline{\hspace{2cm}}$	$2\ 000 - \underline{\hspace{2cm}} = 1000$	A 12	4260 1 000
13.) ●●	$4\ 222 - \underline{\hspace{2cm}} = 3422$	$\underline{\hspace{2cm}} - 3\ 000 = 2282$	A 13	800 5 282
14.) ●●	$3\ 900 - \underline{\hspace{2cm}} = 2900$	$4\ 000 - 890 = \underline{\hspace{2cm}}$	A 14	1 000 3110
15.) ●●	$6\ 000 - \underline{\hspace{2cm}} = 3000$	$5\ 000 - \underline{\hspace{2cm}} = 1100$	A 15	3 000 3 900

© 2015 Bernhard Storch

erstellt mit RAGTIME EDU tools



netzwerk
fernen

zur Vollversion

Subtraktion im Zahlenraum 10 000

Code Nr. 50

Nr. 50

Name:
Klasse:

Datum:

1.) ●●	$3\ 064 - 880 = \underline{\hspace{2cm}}$	$3\ 200 - 19 = \underline{\hspace{2cm}}$	A 1	2184 3181
2.) ●●	$2\ 600 - 960 = \underline{\hspace{2cm}}$	$2\ 231 - 100 = \underline{\hspace{2cm}}$	A 2	1640 2131
3.) ●●	$2\ 700 - 1\ 000 = \underline{\hspace{2cm}}$	$2\ 630 - 2\ 000 = \underline{\hspace{2cm}}$	A 3	1700 630
4.) ●●	$2\ 000 - 570 = \underline{\hspace{2cm}}$	$2\ 000 - 1\ 000 = \underline{\hspace{2cm}}$	A 4	1430 1000
5.) ●●	$2\ 008 - 1\ 400 = \underline{\hspace{2cm}}$	$3\ 900 - 290 = \underline{\hspace{2cm}}$	A 5	608 3610
6.) ●●	$2\ 104 - 200 = \underline{\hspace{2cm}}$	$2\ 000 - \underline{\hspace{2cm}} = 1000$	A 6	1904 1 000
7.) ●●	$5\ 600 - 200 = \underline{\hspace{2cm}}$	$902 - \underline{\hspace{2cm}} = 102$	A 7	5400 800
8.) ●●	$5\ 000 - \underline{\hspace{2cm}} = 4500$	$1\ 700 - \underline{\hspace{2cm}} = 700$	A 8	500 1 000
9.) ●●	$4\ 000 - 20 = \underline{\hspace{2cm}}$	$3\ 000 - 2\ 500 = \underline{\hspace{2cm}}$	A 9	3980 500
10.) ●●	$7\ 000 - \underline{\hspace{2cm}} = 6710$	$3\ 900 - 3\ 000 = \underline{\hspace{2cm}}$	A 10	290 900
11.) ●●	$4\ 207 - \underline{\hspace{2cm}} = 207$	$\underline{\hspace{2cm}} - 1\ 300 = 3700$	A 11	4 000 5 000
12.) ●●	$2\ 935 - 300 = \underline{\hspace{2cm}}$	$5\ 272 - 3\ 000 = \underline{\hspace{2cm}}$	A 12	2635 2272
13.) ●●	$\underline{\hspace{2cm}} - 500 = 5500$	$\underline{\hspace{2cm}} - 100 = 7700$	A 13	6 000 7 800
14.) ●●	$4\ 034 - \underline{\hspace{2cm}} = 1934$	$4\ 062 - 3\ 400 = \underline{\hspace{2cm}}$	A 14	2 100 662
15.) ●●	$7\ 260 - 1\ 000 = \underline{\hspace{2cm}}$	$\underline{\hspace{2cm}} - 500 = 6704$	A 15	6260 7 204

© 2015 Bernhard Storch

erstellt mit RAGTIME EDU tools



netzwerk
fernen

zur Vollversion

