

Subtraktion im Zahlenraum 1 000

Code Nr. 1

Nr. 1

Name:
Klasse:

Datum:

1.) ●●

$200 - 100 = \underline{\hspace{2cm}}$

$213 - 75 = \underline{\hspace{2cm}}$

A 1

100
138

2.) ●●

$380 - 59 = \underline{\hspace{2cm}}$

$310 - 70 = \underline{\hspace{2cm}}$

A 2

321
240

3.) ●●

$409 - 40 = \underline{\hspace{2cm}}$

$238 - 20 = \underline{\hspace{2cm}}$

A 3

369
218

4.) ●●

$300 - 110 = \underline{\hspace{2cm}}$

$300 - 200 = \underline{\hspace{2cm}}$

A 4

190
100

5.) ●●

$418 - 90 = \underline{\hspace{2cm}}$

$404 - 10 = \underline{\hspace{2cm}}$

A 5

328
394

6.) ●●

$374 - 200 = \underline{\hspace{2cm}}$

$300 - 200 = \underline{\hspace{2cm}}$

A 6

174
100

7.) ●●

$390 - \underline{\hspace{2cm}} = 250$

$400 - 180 = \underline{\hspace{2cm}}$

A 7

140
220

8.) ●●

$500 - 30 = \underline{\hspace{2cm}}$

$590 - 26 = \underline{\hspace{2cm}}$

A 8

470
564

9.) ●●

$650 - 68 = \underline{\hspace{2cm}}$

$512 - \underline{\hspace{2cm}} = 450$

A 9

582
62

10.) ●●

$600 - 200 = \underline{\hspace{2cm}}$

$660 - \underline{\hspace{2cm}} = 659$

A 10

400
1

11.) ●●

$523 - 250 = \underline{\hspace{2cm}}$

$\underline{\hspace{2cm}} - 390 = 10$

A 11

273
400

12.) ●●

$800 - \underline{\hspace{2cm}} = 760$

$638 - \underline{\hspace{2cm}} = 438$

A 12

40
200

13.) ●●

$\underline{\hspace{2cm}} - 80 = 630$

$300 - 140 = \underline{\hspace{2cm}}$

A 13

710
160

14.) ●●

$126 - \underline{\hspace{2cm}} = 74$

$504 - \underline{\hspace{2cm}} = 404$

A 14

52
100

15.) ●●

$\underline{\hspace{2cm}} - 69 = 238$

$500 - 400 = \underline{\hspace{2cm}}$

A 15

307
100

© 2015 Bernhard Storch

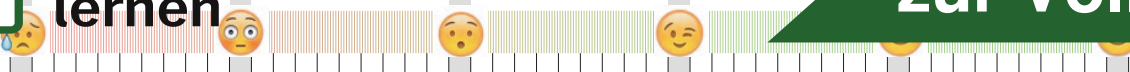
erstellt mit RAGTIME EDU tools



netzwerk
lernen

Vergleiche mit dem Lösungstreifen und markiere hier, wie du

zur Vollversion



Subtraktion im Zahlenraum 1 000

Code Nr. 2

Nr. 2

Name:
Klasse:

Datum:

1.) ●●

$301 - 8 = \underline{\hspace{2cm}}$

$300 - 30 = \underline{\hspace{2cm}}$

A 1

293
270

2.) ●●

$200 - 100 = \underline{\hspace{2cm}}$

$312 - 100 = \underline{\hspace{2cm}}$

A 2

100
212

3.) ●●

$211 - 47 = \underline{\hspace{2cm}}$

$260 - 170 = \underline{\hspace{2cm}}$

A 3

164
90

4.) ●●

$300 - 100 = \underline{\hspace{2cm}}$

$290 - 110 = \underline{\hspace{2cm}}$

A 4

200
180

5.) ●●

$500 - 6 = \underline{\hspace{2cm}}$

$123 - 10 = \underline{\hspace{2cm}}$

A 5

494
113

6.) ●●

$400 - \underline{\hspace{2cm}} = 379$

$231 - \underline{\hspace{2cm}} = 121$

A 6

21
110

7.) ●●

$550 - \underline{\hspace{2cm}} = 461$

$301 - \underline{\hspace{2cm}} = 217$

A 7

89
84

8.) ●●

$400 - \underline{\hspace{2cm}} = 200$

$370 - \underline{\hspace{2cm}} = 170$

A 8

200
200

9.) ●●

$200 - \underline{\hspace{2cm}} = 180$

$270 - 200 = \underline{\hspace{2cm}}$

A 9

20
70

10.) ●●

$500 - 10 = \underline{\hspace{2cm}}$

$300 - \underline{\hspace{2cm}} = 100$

A 10

490
200

11.) ●●

$\underline{\hspace{2cm}} - 200 = 400$

$629 - 160 = \underline{\hspace{2cm}}$

A 11

600
469

12.) ●●

$664 - \underline{\hspace{2cm}} = 564$

$\underline{\hspace{2cm}} - 220 = 380$

A 12

100
600

13.) ●●

$649 - 50 = \underline{\hspace{2cm}}$

$\underline{\hspace{2cm}} - 200 = 452$

A 13

599
652

14.) ●●

$300 - \underline{\hspace{2cm}} = 270$

$330 - 200 = \underline{\hspace{2cm}}$

A 14

30
130

15.) ●●

$600 - \underline{\hspace{2cm}} = 300$

$640 - \underline{\hspace{2cm}} = 440$

A 15

300
200

© 2015 Bernhard Storch

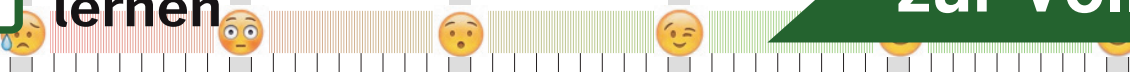
erstellt mit RAGTIME EDU tools



netzwerk
lernen

Vergleiche mit dem Lösungstreifen und markiere hier, wie du

zur Vollversion



Subtraktion im Zahlenraum 1 000

Code Nr. 3

Nr. 3

Name:
Klasse:

Datum:

1.) ●●	$216 - 51 = \underline{\hspace{2cm}}$	$294 - 100 = \underline{\hspace{2cm}}$	A 1	165 194
2.) ●●	$300 - 100 = \underline{\hspace{2cm}}$	$160 - 100 = \underline{\hspace{2cm}}$	A 2	200 60
3.) ●●	$300 - 200 = \underline{\hspace{2cm}}$	$460 - 32 = \underline{\hspace{2cm}}$	A 3	100 428
4.) ●●	$130 - 60 = \underline{\hspace{2cm}}$	$437 - 16 = \underline{\hspace{2cm}}$	A 4	70 421
5.) ●●	$500 - 68 = \underline{\hspace{2cm}}$	$270 - 240 = \underline{\hspace{2cm}}$	A 5	432 30
6.) ●●	$300 - \underline{\hspace{2cm}} = 190$	$560 - \underline{\hspace{2cm}} = 523$	A 6	110 37
7.) ●●	$511 - 80 = \underline{\hspace{2cm}}$	$352 - 60 = \underline{\hspace{2cm}}$	A 7	431 292
8.) ●●	$491 - \underline{\hspace{2cm}} = 451$	$548 - 54 = \underline{\hspace{2cm}}$	A 8	40 494
9.) ●●	$380 - \underline{\hspace{2cm}} = 80$	$300 - \underline{\hspace{2cm}} = 285$	A 9	300 15
10.) ●●	$400 - 200 = \underline{\hspace{2cm}}$	$400 - 400 = \underline{\hspace{2cm}}$	A 10	200 0
11.) ●●	$300 - \underline{\hspace{2cm}} = 266$	$211 - \underline{\hspace{2cm}} = 153$	A 11	34 58
12.) ●●	$\underline{\hspace{2cm}} - 50 = 320$	$308 - \underline{\hspace{2cm}} = 268$	A 12	370 40
13.) ●●	$700 - \underline{\hspace{2cm}} = 500$	$400 - \underline{\hspace{2cm}} = 140$	A 13	200 260
14.) ●●	$609 - 100 = \underline{\hspace{2cm}}$	$\underline{\hspace{2cm}} - 100 = 742$	A 14	509 842
15.) ●●	$329 - 80 = \underline{\hspace{2cm}}$	$374 - 290 = \underline{\hspace{2cm}}$	A 15	249 84

© 2015 Bernhard Storch


erstellt mit RAGTIME EDU tools



netzwerk
lernen

Vergleiche mit dem Lösungstreifen und markiere hier, wie du

zur Vollversion



Subtraktion im Zahlenraum 1 000

Code Nr. 26

Nr. 26

Name:
Klasse:

Datum:

1.) ●●	$400 - 10 = \underline{\hspace{2cm}}$	$373 - 40 = \underline{\hspace{2cm}}$	A 1	390 333
2.) ●●	$300 - 15 = \underline{\hspace{2cm}}$	$285 - 100 = \underline{\hspace{2cm}}$	A 2	285 185
3.) ●●	$254 - 83 = \underline{\hspace{2cm}}$	$308 - 160 = \underline{\hspace{2cm}}$	A 3	171 148
4.) ●●	$304 - 200 = \underline{\hspace{2cm}}$	$244 - 150 = \underline{\hspace{2cm}}$	A 4	104 94
5.) ●●	$303 - 30 = \underline{\hspace{2cm}}$	$324 - 77 = \underline{\hspace{2cm}}$	A 5	273 247
6.) ●●	$420 - \underline{\hspace{2cm}} = 260$	$500 - \underline{\hspace{2cm}} = 400$	A 6	160 100
7.) ●●	$490 - 110 = \underline{\hspace{2cm}}$	$252 - \underline{\hspace{2cm}} = 52$	A 7	380 200
8.) ●●	$400 - \underline{\hspace{2cm}} = 100$	$410 - \underline{\hspace{2cm}} = 180$	A 8	300 230
9.) ●●	$600 - \underline{\hspace{2cm}} = 500$	$542 - \underline{\hspace{2cm}} = 455$	A 9	100 87
10.) ●●	$510 - \underline{\hspace{2cm}} = 506$	$532 - 24 = \underline{\hspace{2cm}}$	A 10	4 508
11.) ●●	$\underline{\hspace{2cm}} - 140 = 440$	$617 - \underline{\hspace{2cm}} = 557$	A 11	580 60
12.) ●●	$731 - \underline{\hspace{2cm}} = 671$	$\underline{\hspace{2cm}} - 200 = 290$	A 12	60 490
13.) ●●	$683 - 66 = \underline{\hspace{2cm}}$	$653 - 6 = \underline{\hspace{2cm}}$	A 13	617 647
14.) ●●	$\underline{\hspace{2cm}} - 200 = 212$	$\underline{\hspace{2cm}} - 350 = 40$	A 14	412 390
15.) ●●	$\underline{\hspace{2cm}} - 100 = 720$	$605 - 370 = \underline{\hspace{2cm}}$	A 15	820 235

© 2015 Bernhard Storch


erstellt mit RAGTIME EDU tools



netzwerk
lernen

Vergleiche mit dem Lösungstreifen und markiere hier, wie du

zur Vollversion



Subtraktion im Zahlenraum 1 000

Code Nr. 27

Nr. 27

Name:
Klasse:

Datum:

1.) ●●

$341 - 60 = \underline{\hspace{2cm}}$

$310 - 80 = \underline{\hspace{2cm}}$

A 1

281
230

2.) ●●

$75 - 20 = \underline{\hspace{2cm}}$

$231 - 200 = \underline{\hspace{2cm}}$

A 2

55
31

3.) ●●

$230 - 40 = \underline{\hspace{2cm}}$

$200 - 51 = \underline{\hspace{2cm}}$

A 3

190
149

4.) ●●

$500 - 40 = \underline{\hspace{2cm}}$

$326 - 190 = \underline{\hspace{2cm}}$

A 4

460
136

5.) ●●

$500 - 110 = \underline{\hspace{2cm}}$

$410 - 110 = \underline{\hspace{2cm}}$

A 5

390
300

6.) ●●

$300 - \underline{\hspace{2cm}} = 230$

$434 - \underline{\hspace{2cm}} = 234$

A 6

70
200

7.) ●●

$337 - \underline{\hspace{2cm}} = 137$

$300 - \underline{\hspace{2cm}} = 220$

A 7

200
80

8.) ●●

$575 - 30 = \underline{\hspace{2cm}}$

$562 - \underline{\hspace{2cm}} = 462$

A 8

545
100

9.) ●●

$535 - 200 = \underline{\hspace{2cm}}$

$647 - 37 = \underline{\hspace{2cm}}$

A 9

335
610

10.) ●●

$350 - \underline{\hspace{2cm}} = 150$

$435 - \underline{\hspace{2cm}} = 410$

A 10

200
25

11.) ●●

$\underline{\hspace{2cm}} - 72 = 338$

$510 - \underline{\hspace{2cm}} = 200$

A 11

410
310

12.) ●●

$\underline{\hspace{2cm}} - 170 = 530$

$500 - \underline{\hspace{2cm}} = 200$

A 12

700
300

13.) ●●

$434 - 340 = \underline{\hspace{2cm}}$

$400 - \underline{\hspace{2cm}} = 300$

A 13

94
100

14.) ●●

$480 - \underline{\hspace{2cm}} = 130$

$\underline{\hspace{2cm}} - 300 = 140$

A 14

350
440

15.) ●●

$610 - 200 = \underline{\hspace{2cm}}$

$300 - \underline{\hspace{2cm}} = 270$

A 15

410
30

© 2015 Bernhard Storch

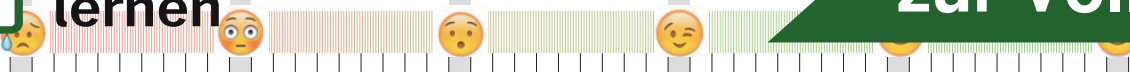
erstellt mit RAGTIME EDU tools



netzwerk
lernen

Vergleiche mit dem Lösungstreifen und markiere hier, wie du

zur Vollversion



Subtraktion im Zahlenraum 1 000

Code Nr. 28

Nr. 28

Name:
Klasse:

Datum:

1.) ●●

$170 - 160 = \underline{\hspace{2cm}}$

$210 - 100 = \underline{\hspace{2cm}}$

A 1

10
110

2.) ●●

$410 - 30 = \underline{\hspace{2cm}}$

$294 - 200 = \underline{\hspace{2cm}}$

A 2

380
94

3.) ●●

$190 - 20 = \underline{\hspace{2cm}}$

$70 - 60 = \underline{\hspace{2cm}}$

A 3

170
10

4.) ●●

$380 - 55 = \underline{\hspace{2cm}}$

$300 - 130 = \underline{\hspace{2cm}}$

A 4

325
170

5.) ●●

$260 - 200 = \underline{\hspace{2cm}}$

$200 - 100 = \underline{\hspace{2cm}}$

A 5

60
100

6.) ●●

$490 - 19 = \underline{\hspace{2cm}}$

$600 - 42 = \underline{\hspace{2cm}}$

A 6

471
558

7.) ●●

$400 - \underline{\hspace{2cm}} = 190$

$400 - \underline{\hspace{2cm}} = 100$

A 7

210
300

8.) ●●

$617 - \underline{\hspace{2cm}} = 539$

$460 - 210 = \underline{\hspace{2cm}}$

A 8

78
250

9.) ●●

$400 - 98 = \underline{\hspace{2cm}}$

$480 - 200 = \underline{\hspace{2cm}}$

A 9

302
280

10.) ●●

$500 - \underline{\hspace{2cm}} = 300$

$500 - \underline{\hspace{2cm}} = 300$

A 10

200
200

11.) ●●

$600 - \underline{\hspace{2cm}} = 430$

$505 - 200 = \underline{\hspace{2cm}}$

A 11

170
305

12.) ●●

$644 - \underline{\hspace{2cm}} = 474$

$574 - 300 = \underline{\hspace{2cm}}$

A 12

170
274

13.) ●●

$\underline{\hspace{2cm}} - 200 = 120$

$\underline{\hspace{2cm}} - 20 = 430$

A 13

320
450

14.) ●●

$536 - 170 = \underline{\hspace{2cm}}$

$710 - \underline{\hspace{2cm}} = 480$

A 14

366
230

15.) ●●

$492 - \underline{\hspace{2cm}} = 192$

$262 - 23 = \underline{\hspace{2cm}}$

A 15

300
239

© 2015 Bernhard Storch

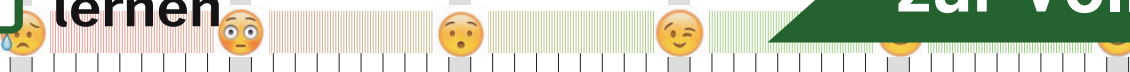
erstellt mit RAGTIME EDU tools



netzwerk
lernen

Vergleiche mit dem Lösungstreifen und markiere hier, wie du

zur Vollversion



Subtraktion im Zahlenraum 1 000

Code Nr. 48

Nr. 48

Name:
Klasse:

Datum:

1.) ●●

$48 - 20 = \underline{\hspace{2cm}}$

$400 - 60 = \underline{\hspace{2cm}}$

A 1

28
340

2.) ●●

$312 - 81 = \underline{\hspace{2cm}}$

$160 - 80 = \underline{\hspace{2cm}}$

A 2

231
80

3.) ●●

$340 - 100 = \underline{\hspace{2cm}}$

$380 - 100 = \underline{\hspace{2cm}}$

A 3

240
280

4.) ●●

$280 - 56 = \underline{\hspace{2cm}}$

$400 - 15 = \underline{\hspace{2cm}}$

A 4

224
385

5.) ●●

$500 - 45 = \underline{\hspace{2cm}}$

$380 - 100 = \underline{\hspace{2cm}}$

A 5

455
280

6.) ●●

$400 - 110 = \underline{\hspace{2cm}}$

$520 - 100 = \underline{\hspace{2cm}}$

A 6

290
420

7.) ●●

$150 - \underline{\hspace{2cm}} = 50$

$440 - 7 = \underline{\hspace{2cm}}$

A 7

100
433

8.) ●●

$433 - \underline{\hspace{2cm}} = 363$

$336 - \underline{\hspace{2cm}} = 156$

A 8

70
180

9.) ●●

$600 - \underline{\hspace{2cm}} = 500$

$334 - \underline{\hspace{2cm}} = 234$

A 9

100
100

10.) ●●

$600 - \underline{\hspace{2cm}} = 410$

$640 - 90 = \underline{\hspace{2cm}}$

A 10

190
550

11.) ●●

$500 - \underline{\hspace{2cm}} = 300$

$\underline{\hspace{2cm}} - 79 = 150$

A 11

200
229

12.) ●●

$510 - 98 = \underline{\hspace{2cm}}$

$730 - \underline{\hspace{2cm}} = 700$

A 12

412
30

13.) ●●

$\underline{\hspace{2cm}} - 90 = 410$

$541 - \underline{\hspace{2cm}} = 261$

A 13

500
280

14.) ●●

$833 - \underline{\hspace{2cm}} = 753$

$\underline{\hspace{2cm}} - 260 = 403$

A 14

80
663

15.) ●●

$\underline{\hspace{2cm}} - 140 = 400$

$410 - \underline{\hspace{2cm}} = 40$

A 15

540
370

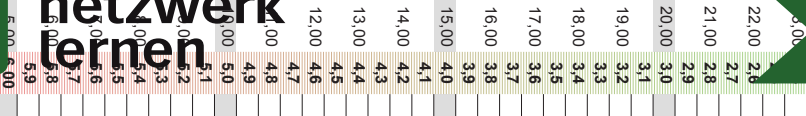
© 2015 Bernhard Storch

erstellt mit RAGTIME EDU tools



netzwerk
lernen

zur Vollversion



Subtraktion im Zahlenraum 1 000

Code Nr. 49

Nr. 49

Name:
Klasse:

Datum:

1.) ●●

$172 - 88 = \underline{\hspace{2cm}}$

$141 - 50 = \underline{\hspace{2cm}}$

A 1

84
91

2.) ●●

$282 - 84 = \underline{\hspace{2cm}}$

$250 - 200 = \underline{\hspace{2cm}}$

A 2

198
50

3.) ●●

$400 - 27 = \underline{\hspace{2cm}}$

$460 - 55 = \underline{\hspace{2cm}}$

A 3

373
405

4.) ●●

$300 - 180 = \underline{\hspace{2cm}}$

$300 - 190 = \underline{\hspace{2cm}}$

A 4

120
110

5.) ●●

$400 - 140 = \underline{\hspace{2cm}}$

$423 - 60 = \underline{\hspace{2cm}}$

A 5

260
363

6.) ●●

$380 - \underline{\hspace{2cm}} = 180$

$514 - \underline{\hspace{2cm}} = 478$

A 6

200
36

7.) ●●

$210 - 200 = \underline{\hspace{2cm}}$

$300 - \underline{\hspace{2cm}} = 260$

A 7

10
40

8.) ●●

$560 - 59 = \underline{\hspace{2cm}}$

$360 - 300 = \underline{\hspace{2cm}}$

A 8

501
60

9.) ●●

$230 - 110 = \underline{\hspace{2cm}}$

$210 - 200 = \underline{\hspace{2cm}}$

A 9

120
10

10.) ●●

$341 - \underline{\hspace{2cm}} = 41$

$710 - 80 = \underline{\hspace{2cm}}$

A 10

300
630

11.) ●●

$\underline{\hspace{2cm}} - 170 = 320$

$\underline{\hspace{2cm}} - 50 = 420$

A 11

490
470

12.) ●●

$\underline{\hspace{2cm}} - 400 = 80$

$\underline{\hspace{2cm}} - 210 = 90$

A 12

480
300

13.) ●●

$600 - 100 = \underline{\hspace{2cm}}$

$731 - \underline{\hspace{2cm}} = 631$

A 13

500
100

14.) ●●

$547 - \underline{\hspace{2cm}} = 197$

$800 - 39 = \underline{\hspace{2cm}}$

A 14

350
761

15.) ●●

$\underline{\hspace{2cm}} - 290 = 10$

$736 - 23 = \underline{\hspace{2cm}}$

A 15

300
713

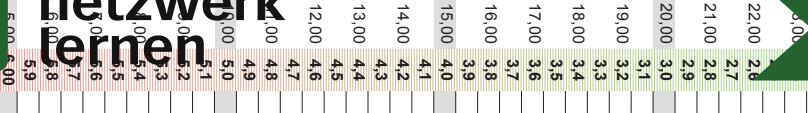
© 2015 Bernhard Storch

erstellt mit RAGTIME EDU tools



netzwerk
fernen

zur Vollversion



Subtraktion im Zahlenraum 1 000

Code Nr. 50

Nr. 50

Name:
Klasse:

Datum:

1.) ●●

$272 - 10 = \underline{\hspace{2cm}}$

$340 - 57 = \underline{\hspace{2cm}}$

A 1

262
283

2.) ●●

$212 - 1 = \underline{\hspace{2cm}}$

$90 - 20 = \underline{\hspace{2cm}}$

A 2

211
70

3.) ●●

$264 - 60 = \underline{\hspace{2cm}}$

$200 - 100 = \underline{\hspace{2cm}}$

A 3

204
100

4.) ●●

$248 - 14 = \underline{\hspace{2cm}}$

$292 - 200 = \underline{\hspace{2cm}}$

A 4

234
92

5.) ●●

$200 - 100 = \underline{\hspace{2cm}}$

$440 - 52 = \underline{\hspace{2cm}}$

A 5

100
388

6.) ●●

$291 - 100 = \underline{\hspace{2cm}}$

$430 - 90 = \underline{\hspace{2cm}}$

A 6

191
340

7.) ●●

$410 - 240 = \underline{\hspace{2cm}}$

$600 - \underline{\hspace{2cm}} = 542$

A 7

170
58

8.) ●●

$519 - 90 = \underline{\hspace{2cm}}$

$333 - \underline{\hspace{2cm}} = 237$

A 8

429
96

9.) ●●

$650 - 8 = \underline{\hspace{2cm}}$

$339 - 270 = \underline{\hspace{2cm}}$

A 9

642
69

10.) ●●

$400 - \underline{\hspace{2cm}} = 200$

$300 - 300 = \underline{\hspace{2cm}}$

A 10

200
0

11.) ●●

$312 - \underline{\hspace{2cm}} = 282$

$\underline{\hspace{2cm}} - 43 = 56$

A 11

30
99

12.) ●●

$720 - 82 = \underline{\hspace{2cm}}$

$\underline{\hspace{2cm}} - 400 = 45$

A 12

638
445

13.) ●●

$780 - \underline{\hspace{2cm}} = 730$

$\underline{\hspace{2cm}} - 90 = 247$

A 13

50
337

14.) ●●

$\underline{\hspace{2cm}} - 70 = 530$

$\underline{\hspace{2cm}} - 100 = 620$

A 14

600
720

15.) ●●

$422 - \underline{\hspace{2cm}} = 352$

$400 - \underline{\hspace{2cm}} = 370$

A 15

70
30

© 2015 Bernhard Storch

erstellt mit RAGTIME EDU tools



netzwerk
fernen

zur Vollversion

