

Division im Zahlenraum 10 000

Code Nr. 1

Nr. 1

Name:
Klasse:

Datum:

1.) ●●	$1\ 680 : 56 = \underline{\hspace{2cm}}$	$4\ 000 : 500 = \underline{\hspace{2cm}}$	A 1	30 8
2.) ●●	$4\ 020 : 670 = \underline{\hspace{2cm}}$	$3\ 250 : 50 = \underline{\hspace{2cm}}$	A 2	6 65
3.) ●●	$1\ 500 : 30 = \underline{\hspace{2cm}}$	$80 : 4 = \underline{\hspace{2cm}}$	A 3	50 20
4.) ●●	$4\ 550 : 50 = \underline{\hspace{2cm}}$	$4\ 000 : 400 = \underline{\hspace{2cm}}$	A 4	91 10
5.) ●●	$4\ 100 : 41 = \underline{\hspace{2cm}}$	$1\ 440 : 20 = \underline{\hspace{2cm}}$	A 5	100 72
6.) ●●	$4\ 000 : 40 = \underline{\hspace{2cm}}$	$800 : 10 = \underline{\hspace{2cm}}$	A 6	100 80
7.) ●●	$6\ 400 : \underline{\hspace{2cm}} = 160$	$5\ 700 : \underline{\hspace{2cm}} = 30$	A 7	40 190
8.) ●●	$1\ 300 : \underline{\hspace{2cm}} = 10$	$869 : 79 = \underline{\hspace{2cm}}$	A 8	130 11
9.) ●●	$2\ 100 : 30 = \underline{\hspace{2cm}}$	$600 : 75 = \underline{\hspace{2cm}}$	A 9	70 8
10.) ●●	$6\ 300 : 90 = \underline{\hspace{2cm}}$	$4\ 000 : \underline{\hspace{2cm}} = 100$	A 10	70 40
11.) ●●	$\underline{\hspace{2cm}} : 90 = 90$	$\underline{\hspace{2cm}} : 92 = 54$	A 11	8 100 4 968
12.) ●●	$4\ 550 : 130 = \underline{\hspace{2cm}}$	$640 : \underline{\hspace{2cm}} = 8$	A 12	35 80
13.) ●●	$3\ 080 : 44 = \underline{\hspace{2cm}}$	$700 : 10 = \underline{\hspace{2cm}}$	A 13	70 70
14.) ●●	$3\ 600 : 60 = \underline{\hspace{2cm}}$	$\underline{\hspace{2cm}} : 60 = 100$	A 14	60 6 000
15.) ●●	$\underline{\hspace{2cm}} : 90 = 72$	$2\ 640 : \underline{\hspace{2cm}} = 24$	A 15	6 480 110

© 2015 Bernhard Storch


erstellt mit RAGTIME EDU tools



netzwerk
lernen

Vergleiche mit dem Lösungstreifen und markiere hier, wie du

zur Vollversion



Division im Zahlenraum 10 000

Code Nr. 2

Nr. 2

Name:
Klasse:

Datum:

1.) ●●	$1\ 530 : 51 = \underline{\hspace{2cm}}$	$1\ 500 : 300 = \underline{\hspace{2cm}}$	A 1	30 5
2.) ●●	$1\ 000 : 20 = \underline{\hspace{2cm}}$	$3\ 400 : 20 = \underline{\hspace{2cm}}$	A 2	50 170
3.) ●●	$750 : 15 = \underline{\hspace{2cm}}$	$4\ 000 : 200 = \underline{\hspace{2cm}}$	A 3	50 20
4.) ●●	$2\ 000 : 100 = \underline{\hspace{2cm}}$	$4\ 221 : 67 = \underline{\hspace{2cm}}$	A 4	20 63
5.) ●●	$5\ 120 : 8 = \underline{\hspace{2cm}}$	$2\ 450 : 50 = \underline{\hspace{2cm}}$	A 5	640 49
6.) ●●	$3\ 591 : 57 = \underline{\hspace{2cm}}$	$6\ 000 : 60 = \underline{\hspace{2cm}}$	A 6	63 100
7.) ●●	$3\ 800 : \underline{\hspace{2cm}} = 76$	$6\ 000 : \underline{\hspace{2cm}} = 60$	A 7	50 100
8.) ●●	$6\ 800 : \underline{\hspace{2cm}} = 170$	$6\ 000 : 30 = \underline{\hspace{2cm}}$	A 8	40 200
9.) ●●	$5\ 280 : 88 = \underline{\hspace{2cm}}$	$4\ 080 : 60 = \underline{\hspace{2cm}}$	A 9	60 68
10.) ●●	$280 : 14 = \underline{\hspace{2cm}}$	$5\ 610 : \underline{\hspace{2cm}} = 33$	A 10	20 170
11.) ●●	$\underline{\hspace{2cm}} : 100 = 44$	$1\ 700 : 20 = \underline{\hspace{2cm}}$	A 11	4 400 85
12.) ●●	$770 : \underline{\hspace{2cm}} = 11$	$6\ 600 : \underline{\hspace{2cm}} = 60$	A 12	70 110
13.) ●●	$\underline{\hspace{2cm}} : 100 = 30$	$7\ 700 : 770 = \underline{\hspace{2cm}}$	A 13	3 000 10
14.) ●●	$3\ 800 : 38 = \underline{\hspace{2cm}}$	$1\ 320 : 33 = \underline{\hspace{2cm}}$	A 14	100 40
15.) ●●	$2\ 988 : 36 = \underline{\hspace{2cm}}$	$6\ 300 : 70 = \underline{\hspace{2cm}}$	A 15	83 90

© 2015 Bernhard Storch


erstellt mit RAGTIME EDU tools



netzwerk
lernen

Vergleiche mit dem Lösungstreifen und markiere hier, wie du

zur Vollversion



Division im Zahlenraum 10 000

Code Nr. 3

Nr. 3

Name:
Klasse:

Datum:

1.) ●●	$1\ 600 : 40 = \underline{\hspace{2cm}}$	$532 : 38 = \underline{\hspace{2cm}}$	A 1	40 14
2.) ●●	$3\ 200 : 64 = \underline{\hspace{2cm}}$	$336 : 24 = \underline{\hspace{2cm}}$	A 2	50 14
3.) ●●	$650 : 5 = \underline{\hspace{2cm}}$	$2\ 100 : 70 = \underline{\hspace{2cm}}$	A 3	130 30
4.) ●●	$4\ 000 : 10 = \underline{\hspace{2cm}}$	$3\ 710 : 53 = \underline{\hspace{2cm}}$	A 4	400 70
5.) ●●	$2\ 800 : 28 = \underline{\hspace{2cm}}$	$5\ 467 : 71 = \underline{\hspace{2cm}}$	A 5	100 77
6.) ●●	$1\ 480 : 20 = \underline{\hspace{2cm}}$	$2\ 000 : \underline{\hspace{2cm}} = 20$	A 6	74 100
7.) ●●	$450 : 9 = \underline{\hspace{2cm}}$	$4\ 000 : 80 = \underline{\hspace{2cm}}$	A 7	50 50
8.) ●●	$8\ 000 : \underline{\hspace{2cm}} = 40$	$2\ 500 : 50 = \underline{\hspace{2cm}}$	A 8	200 50
9.) ●●	$5\ 220 : \underline{\hspace{2cm}} = 18$	$5\ 000 : \underline{\hspace{2cm}} = 100$	A 9	290 50
10.) ●●	$1\ 581 : \underline{\hspace{2cm}} = 31$	$6\ 000 : 80 = \underline{\hspace{2cm}}$	A 10	51 75
11.) ●●	$5\ 000 : \underline{\hspace{2cm}} = 200$	$476 : \underline{\hspace{2cm}} = 7$	A 11	25 68
12.) ●●	$7\ 000 : 350 = \underline{\hspace{2cm}}$	$10\ 000 : 200 = \underline{\hspace{2cm}}$	A 12	20 50
13.) ●●	$200 : \underline{\hspace{2cm}} = 20$	$6\ 120 : 12 = \underline{\hspace{2cm}}$	A 13	10 510
14.) ●●	$6\ 020 : \underline{\hspace{2cm}} = 140$	$7\ 670 : \underline{\hspace{2cm}} = 130$	A 14	43 59
15.) ●●	$6\ 000 : \underline{\hspace{2cm}} = 30$	$3\ 000 : 60 = \underline{\hspace{2cm}}$	A 15	200 50

© 2015 Bernhard Storch


erstellt mit RAGTIME EDU tools



netzwerk
lernen

Vergleiche mit dem Lösungstreifen und markiere hier, wie du

zur Vollversion



Division im Zahlenraum 10 000

Code Nr. 25

Nr. 25

Name:
Klasse:

Datum:

1.) ●●	$270 : 18 = \underline{\hspace{2cm}}$	$4\,410 : 21 = \underline{\hspace{2cm}}$	A 1	15 210
2.) ●●	$750 : 30 = \underline{\hspace{2cm}}$	$2\,240 : 280 = \underline{\hspace{2cm}}$	A 2	25 8
3.) ●●	$4\,400 : 10 = \underline{\hspace{2cm}}$	$4\,500 : 300 = \underline{\hspace{2cm}}$	A 3	440 15
4.) ●●	$4\,200 : 70 = \underline{\hspace{2cm}}$	$2\,100 : 30 = \underline{\hspace{2cm}}$	A 4	60 70
5.) ●●	$2\,520 : 36 = \underline{\hspace{2cm}}$	$5\,000 : 100 = \underline{\hspace{2cm}}$	A 5	70 50
6.) ●●	$3\,710 : \underline{\hspace{2cm}} = 53$	$4\,320 : 36 = \underline{\hspace{2cm}}$	A 6	70 120
7.) ●●	$4\,160 : 320 = \underline{\hspace{2cm}}$	$2\,240 : \underline{\hspace{2cm}} = 16$	A 7	13 140
8.) ●●	$4\,620 : \underline{\hspace{2cm}} = 70$	$7\,125 : \underline{\hspace{2cm}} = 75$	A 8	66 95
9.) ●●	$4\,050 : 81 = \underline{\hspace{2cm}}$	$5\,000 : 50 = \underline{\hspace{2cm}}$	A 9	50 100
10.) ●●	$7\,000 : \underline{\hspace{2cm}} = 10$	$6\,000 : 20 = \underline{\hspace{2cm}}$	A 10	700 300
11.) ●●	$\underline{\hspace{2cm}} : 30 = 20$	$6\,000 : \underline{\hspace{2cm}} = 200$	A 11	600 30
12.) ●●	$7\,280 : \underline{\hspace{2cm}} = 80$	$4\,640 : 58 = \underline{\hspace{2cm}}$	A 12	91 80
13.) ●●	$\underline{\hspace{2cm}} : 140 = 48$	$5\,400 : \underline{\hspace{2cm}} = 2$	A 13	6\,720 2\,700
14.) ●●	$660 : 55 = \underline{\hspace{2cm}}$	$4\,400 : 2 = \underline{\hspace{2cm}}$	A 14	12 2200
15.) ●●	$2\,900 : 58 = \underline{\hspace{2cm}}$	$\underline{\hspace{2cm}} : 8 = 1200$	A 15	50 9\,600

© 2015 Bernhard Storch


erstellt mit RAGTIME EDU tools



netzwerk
lernen

Vergleiche mit dem Lösungstreifen und markiere hier, wie du

zur Vollversion



Division im Zahlenraum 10 000

Code Nr. 26

Nr. 26

Name:
Klasse:

Datum:

1.) ●●	$210 : 30 = \underline{\hspace{2cm}}$	$400 : 40 = \underline{\hspace{2cm}}$	A 1	7 10
2.) ●●	$354 : 6 = \underline{\hspace{2cm}}$	$106 : 2 = \underline{\hspace{2cm}}$	A 2	59 53
3.) ●●	$4\ 200 : 7 = \underline{\hspace{2cm}}$	$141 : 3 = \underline{\hspace{2cm}}$	A 3	600 47
4.) ●●	$4\ 000 : 10 = \underline{\hspace{2cm}}$	$1\ 760 : 22 = \underline{\hspace{2cm}}$	A 4	400 80
5.) ●●	$23 : 23 = \underline{\hspace{2cm}}$	$4\ 000 : 200 = \underline{\hspace{2cm}}$	A 5	1 20
6.) ●●	$4\ 000 : \underline{\hspace{2cm}} = 200$	$3\ 900 : \underline{\hspace{2cm}} = 65$	A 6	20 60
7.) ●●	$5\ 300 : \underline{\hspace{2cm}} = 10$	$4\ 240 : \underline{\hspace{2cm}} = 80$	A 7	530 53
8.) ●●	$1\ 050 : 15 = \underline{\hspace{2cm}}$	$4\ 140 : 180 = \underline{\hspace{2cm}}$	A 8	70 23
9.) ●●	$2\ 800 : \underline{\hspace{2cm}} = 70$	$4\ 000 : 200 = \underline{\hspace{2cm}}$	A 9	40 20
10.) ●●	$4\ 800 : 120 = \underline{\hspace{2cm}}$	$4\ 590 : 51 = \underline{\hspace{2cm}}$	A 10	40 90
11.) ●●	$\underline{\hspace{2cm}} : 40 = 26$	$7\ 110 : \underline{\hspace{2cm}} = 90$	A 11	1\ 040 79
12.) ●●	$\underline{\hspace{2cm}} : 50 = 110$	$7\ 800 : 78 = \underline{\hspace{2cm}}$	A 12	5\ 500 100
13.) ●●	$8\ 000 : 200 = \underline{\hspace{2cm}}$	$\underline{\hspace{2cm}} : 36 = 90$	A 13	40 3\ 240
14.) ●●	$7\ 200 : \underline{\hspace{2cm}} = 36$	$\underline{\hspace{2cm}} : 43 = 30$	A 14	200 1\ 290
15.) ●●	$7\ 800 : 78 = \underline{\hspace{2cm}}$	$2\ 400 : 80 = \underline{\hspace{2cm}}$	A 15	100 30

© 2015 Bernhard Storch


erstellt mit RAGTIME EDU tools



netzwerk
lernen

Vergleiche mit dem Lösungstreifen und markiere hier, wie du

zur Vollversion



Division im Zahlenraum 10 000

Code Nr. 27

Nr. 27

Name:
Klasse:

Datum:

1.) ●●	$2\ 500 : 50 = \underline{\hspace{2cm}}$	$4\ 070 : 37 = \underline{\hspace{2cm}}$	A 1	50 110
2.) ●●	$2\ 520 : 70 = \underline{\hspace{2cm}}$	$430 : 43 = \underline{\hspace{2cm}}$	A 2	36 10
3.) ●●	$1\ 050 : 150 = \underline{\hspace{2cm}}$	$660 : 20 = \underline{\hspace{2cm}}$	A 3	7 33
4.) ●●	$1\ 680 : 24 = \underline{\hspace{2cm}}$	$1\ 704 : 71 = \underline{\hspace{2cm}}$	A 4	70 24
5.) ●●	$2\ 350 : 470 = \underline{\hspace{2cm}}$	$80 : 40 = \underline{\hspace{2cm}}$	A 5	5 2
6.) ●●	$1\ 260 : 20 = \underline{\hspace{2cm}}$	$4\ 900 : \underline{\hspace{2cm}} = 7$	A 6	63 700
7.) ●●	$2\ 500 : \underline{\hspace{2cm}} = 500$	$1\ 694 : \underline{\hspace{2cm}} = 22$	A 7	5 77
8.) ●●	$1\ 100 : 11 = \underline{\hspace{2cm}}$	$3\ 850 : \underline{\hspace{2cm}} = 77$	A 8	100 50
9.) ●●	$2\ 600 : 260 = \underline{\hspace{2cm}}$	$1\ 914 : 29 = \underline{\hspace{2cm}}$	A 9	10 66
10.) ●●	$8\ 000 : \underline{\hspace{2cm}} = 80$	$5\ 580 : 62 = \underline{\hspace{2cm}}$	A 10	100 90
11.) ●●	$\underline{\hspace{2cm}} : 40 = 100$	$4\ 720 : 59 = \underline{\hspace{2cm}}$	A 11	4 000 80
12.) ●●	$\underline{\hspace{2cm}} : 30 = 80$	$\underline{\hspace{2cm}} : 70 = 41$	A 12	2 400 2 870
13.) ●●	$\underline{\hspace{2cm}} : 8 = 70$	$8\ 000 : \underline{\hspace{2cm}} = 1600$	A 13	560 5
14.) ●●	$3\ 393 : \underline{\hspace{2cm}} = 39$	$\underline{\hspace{2cm}} : 61 = 140$	A 14	87 8 540
15.) ●●	$2\ 451 : \underline{\hspace{2cm}} = 43$	$4\ 000 : \underline{\hspace{2cm}} = 50$	A 15	57 80

© 2015 Bernhard Storch


erstellt mit RAGTIME EDU tools



netzwerk
lernen

Vergleiche mit dem Lösungstreifen und markiere hier, wie du

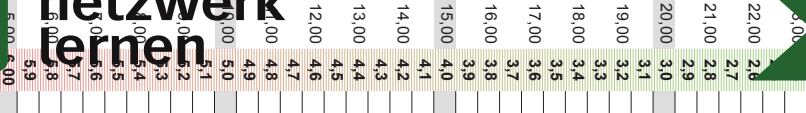
zur Vollversion



Name,
Klasse:

Datum:

1.) ●●	$3\ 200 : 40 = \underline{\hspace{2cm}}$	$1\ 900 : 100 = \underline{\hspace{2cm}}$	A 1	80 19
2.) ●●	$2\ 040 : 34 = \underline{\hspace{2cm}}$	$3\ 150 : 45 = \underline{\hspace{2cm}}$	A 2	60 70
3.) ●●	$2\ 940 : 49 = \underline{\hspace{2cm}}$	$6\ 000 : 2\ 000 = \underline{\hspace{2cm}}$	A 3	60 3
4.) ●●	$210 : 30 = \underline{\hspace{2cm}}$	$4\ 800 : 30 = \underline{\hspace{2cm}}$	A 4	7 160
5.) ●●	$1\ 525 : 25 = \underline{\hspace{2cm}}$	$700 : 70 = \underline{\hspace{2cm}}$	A 5	61 10
6.) ●●	$2\ 100 : 30 = \underline{\hspace{2cm}}$	$5\ 000 : \underline{\hspace{2cm}} = 10$	A 6	70 500
7.) ●●	$4\ 000 : \underline{\hspace{2cm}} = 800$	$5\ 900 : 10 = \underline{\hspace{2cm}}$	A 7	5 590
8.) ●●	$2\ 700 : 150 = \underline{\hspace{2cm}}$	$4\ 800 : \underline{\hspace{2cm}} = 8$	A 8	18 600
9.) ●●	$7\ 100 : \underline{\hspace{2cm}} = 71$	$3\ 150 : 7 = \underline{\hspace{2cm}}$	A 9	100 450
10.) ●●	$280 : \underline{\hspace{2cm}} = 8$	$1\ 650 : 66 = \underline{\hspace{2cm}}$	A 10	35 25
11.) ●●	$495 : \underline{\hspace{2cm}} = 45$	$3\ 640 : \underline{\hspace{2cm}} = 56$	A 11	11 65
12.) ●●	$8\ 000 : \underline{\hspace{2cm}} = 40$	$8\ 400 : \underline{\hspace{2cm}} = 42$	A 12	200 200
13.) ●●	$3\ 280 : 82 = \underline{\hspace{2cm}}$	$4\ 180 : \underline{\hspace{2cm}} = 44$	A 13	40 95
14.) ●●	$9\ 020 : \underline{\hspace{2cm}} = 41$	$\underline{\hspace{2cm}} : 70 = 60$	A 14	220 4 200
15.) ●●	$8\ 000 : \underline{\hspace{2cm}} = 40$	$5\ 000 : 5 = \underline{\hspace{2cm}}$	A 15	200 1000



Name,
Klasse:

Datum:

1.) ●●

$3\ 500 : 50 = \underline{\hspace{2cm}}$

$2\ 070 : 23 = \underline{\hspace{2cm}}$

A 1

70
90

2.) ●●

$2\ 520 : 72 = \underline{\hspace{2cm}}$

$2\ 400 : 40 = \underline{\hspace{2cm}}$

A 2

35
60

3.) ●●

$4\ 550 : 70 = \underline{\hspace{2cm}}$

$1\ 560 : 20 = \underline{\hspace{2cm}}$

A 3

65
78

4.) ●●

$4\ 400 : 200 = \underline{\hspace{2cm}}$

$3\ 266 : 46 = \underline{\hspace{2cm}}$

A 4

22
71

5.) ●●

$3\ 360 : 80 = \underline{\hspace{2cm}}$

$6\ 600 : 200 = \underline{\hspace{2cm}}$

A 5

42
33

6.) ●●

$600 : 60 = \underline{\hspace{2cm}}$

$4\ 000 : \underline{\hspace{2cm}} = 200$

A 6

10
20

7.) ●●

$2\ 700 : 54 = \underline{\hspace{2cm}}$

$6\ 300 : \underline{\hspace{2cm}} = 70$

A 7

50
90

8.) ●●

$2\ 800 : \underline{\hspace{2cm}} = 40$

$800 : 4 = \underline{\hspace{2cm}}$

A 8

70
200

9.) ●●

$240 : 60 = \underline{\hspace{2cm}}$

$8\ 000 : \underline{\hspace{2cm}} = 200$

A 9

4
40

10.) ●●

$1\ 408 : 44 = \underline{\hspace{2cm}}$

$3\ 000 : \underline{\hspace{2cm}} = 100$

A 10

32
30

11.) ●●

$\underline{\hspace{2cm}} : 40 = 92$

$5\ 445 : 55 = \underline{\hspace{2cm}}$

A 11

3\ 680
99

12.) ●●

$\underline{\hspace{2cm}} : 30 = 180$

$160 : \underline{\hspace{2cm}} = 4$

A 12

5\ 400
40

13.) ●●

$\underline{\hspace{2cm}} : 30 = 70$

$1\ 260 : 30 = \underline{\hspace{2cm}}$

A 13

2\ 100
42

14.) ●●

$\underline{\hspace{2cm}} : 7 = 73$

$1\ 260 : 14 = \underline{\hspace{2cm}}$

A 14

511
90

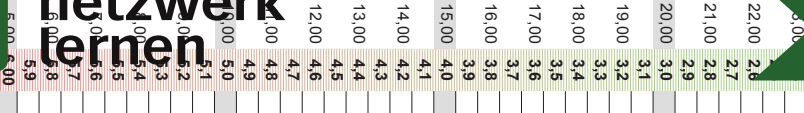
15.) ●●

$4\ 500 : 250 = \underline{\hspace{2cm}}$

$5\ 600 : \underline{\hspace{2cm}} = 80$

A 15

18
70



Division im Zahlenraum 10 000

Code Nr. 50

Nr. 50

Name:
Klasse:

Datum:

1.) ●●	$1\ 760 : 16 = \underline{\hspace{2cm}}$	$2\ 000 : 200 = \underline{\hspace{2cm}}$	A 1	110 10
2.) ●●	$1\ 650 : 55 = \underline{\hspace{2cm}}$	$2\ 000 : 200 = \underline{\hspace{2cm}}$	A 2	30 10
3.) ●●	$1\ 400 : 70 = \underline{\hspace{2cm}}$	$1\ 000 : 50 = \underline{\hspace{2cm}}$	A 3	20 20
4.) ●●	$2\ 490 : 83 = \underline{\hspace{2cm}}$	$2\ 700 : 100 = \underline{\hspace{2cm}}$	A 4	30 27
5.) ●●	$1\ 200 : 30 = \underline{\hspace{2cm}}$	$1\ 740 : 58 = \underline{\hspace{2cm}}$	A 5	40 30
6.) ●●	$3\ 200 : 40 = \underline{\hspace{2cm}}$	$3\ 400 : \underline{\hspace{1cm}} = 34$	A 6	80 100
7.) ●●	$2\ 400 : 30 = \underline{\hspace{2cm}}$	$3\ 000 : \underline{\hspace{1cm}} = 100$	A 7	80 30
8.) ●●	$1\ 500 : \underline{\hspace{1cm}} = 50$	$1\ 600 : \underline{\hspace{1cm}} = 20$	A 8	30 80
9.) ●●	$650 : 13 = \underline{\hspace{2cm}}$	$256 : \underline{\hspace{2cm}} = 64$	A 9	50 4
10.) ●●	$7\ 200 : 40 = \underline{\hspace{2cm}}$	$2\ 160 : 27 = \underline{\hspace{2cm}}$	A 10	180 80
11.) ●●	$5\ 394 : 62 = \underline{\hspace{2cm}}$	$9\ 800 : 200 = \underline{\hspace{2cm}}$	A 11	87 49
12.) ●●	$\underline{\hspace{2cm}} : 85 = 29$	$\underline{\hspace{2cm}} : 180 = 40$	A 12	2\ 465 7\ 200
13.) ●●	$5\ 600 : \underline{\hspace{1cm}} = 80$	$\underline{\hspace{2cm}} : 400 = 20$	A 13	70 8\ 000
14.) ●●	$\underline{\hspace{2cm}} : 670 = 10$	$6\ 800 : 80 = \underline{\hspace{2cm}}$	A 14	6\ 700 85
15.) ●●	$7\ 000 : \underline{\hspace{1cm}} = 100$	$6\ 000 : 100 = \underline{\hspace{2cm}}$	A 15	70 60

© 2015 Bernhard Storch

erstellt mit RAGTIME EDU tools



netzwerk
fernen

zur Vollversion

