

Addition und Subtraktion im Zahlenraum 1 000

Code Nr. 1

Nr. 1

Name:
Klasse:

Datum:

1.) ●●	$60 + 200 = \underline{\hspace{2cm}}$	$200 + 240 = \underline{\hspace{2cm}}$	A 1	260 440
2.) ●●	$200 + 200 = \underline{\hspace{2cm}}$	$300 + 80 = \underline{\hspace{2cm}}$	A 2	400 380
3.) ●●	$300 - 100 = \underline{\hspace{2cm}}$	$58 + 400 = \underline{\hspace{2cm}}$	A 3	200 458
4.) ●●	$44 - 10 = \underline{\hspace{2cm}}$	$200 + 200 = \underline{\hspace{2cm}}$	A 4	34 400
5.) ●●	$80 - 15 = \underline{\hspace{2cm}}$	$150 - 100 = \underline{\hspace{2cm}}$	A 5	65 50
6.) ●●	$5 + \underline{\hspace{2cm}} = 205$	$80 + \underline{\hspace{2cm}} = 640$	A 6	200 560
7.) ●●	$320 - \underline{\hspace{2cm}} = 260$	$300 - \underline{\hspace{2cm}} = 90$	A 7	60 210
8.) ●●	$100 + \underline{\hspace{2cm}} = 600$	$500 - 80 = \underline{\hspace{2cm}}$	A 8	500 420
9.) ●●	$314 - \underline{\hspace{2cm}} = 154$	$400 - 300 = \underline{\hspace{2cm}}$	A 9	160 100
10.) ●●	$500 + \underline{\hspace{2cm}} = 600$	$700 + \underline{\hspace{2cm}} = 750$	A 10	100 50
11.) ●●	$619 - 200 = \underline{\hspace{2cm}}$	$90 + \underline{\hspace{2cm}} = 720$	A 11	419 630
12.) ●●	$260 + 300 = \underline{\hspace{2cm}}$	$630 + \underline{\hspace{2cm}} = 830$	A 12	560 200
13.) ●●	$\underline{\hspace{2cm}} + 200 = 510$	$\underline{\hspace{2cm}} - 56 = 74$	A 13	310 130
14.) ●●	$\underline{\hspace{2cm}} - 130 = 410$	$650 - 180 = \underline{\hspace{2cm}}$	A 14	540 470
15.) ●●	$\underline{\hspace{2cm}} + 6 = 256$	$890 - 20 = \underline{\hspace{2cm}}$	A 15	250 870

© 2015 Bernhard Storch


erstellt mit RAGTIME EDU tools



netzwerk
lernen

Vergleiche mit dem Lösungstreifen und markiere hier, wie du

zur Vollversion



Addition und Subtraktion im Zahlenraum 1 000

Code Nr. 2

Nr. 2

Name:
Klasse:

Datum:

1.) ●●	$229 - 200 = \underline{\hspace{2cm}}$	$380 + 20 = \underline{\hspace{2cm}}$	A 1	29 400
2.) ●●	$100 + 30 = \underline{\hspace{2cm}}$	$160 + 25 = \underline{\hspace{2cm}}$	A 2	130 185
3.) ●●	$90 + 300 = \underline{\hspace{2cm}}$	$170 + 100 = \underline{\hspace{2cm}}$	A 3	390 270
4.) ●●	$241 - 70 = \underline{\hspace{2cm}}$	$300 + 200 = \underline{\hspace{2cm}}$	A 4	171 500
5.) ●●	$180 + 30 = \underline{\hspace{2cm}}$	$140 - 94 = \underline{\hspace{2cm}}$	A 5	210 46
6.) ●●	$410 - 65 = \underline{\hspace{2cm}}$	$320 + 300 = \underline{\hspace{2cm}}$	A 6	345 620
7.) ●●	$300 + 300 = \underline{\hspace{2cm}}$	$480 - \underline{\hspace{2cm}} = 280$	A 7	600 200
8.) ●●	$540 - 97 = \underline{\hspace{2cm}}$	$450 + \underline{\hspace{2cm}} = 451$	A 8	443 1
9.) ●●	$600 + 21 = \underline{\hspace{2cm}}$	$670 + \underline{\hspace{2cm}} = 750$	A 9	621 80
10.) ●●	$280 + 450 = \underline{\hspace{2cm}}$	$500 + \underline{\hspace{2cm}} = 760$	A 10	730 260
11.) ●●	$550 - 21 = \underline{\hspace{2cm}}$	$\underline{\hspace{2cm}} + 96 = 796$	A 11	529 700
12.) ●●	$400 + 420 = \underline{\hspace{2cm}}$	$\underline{\hspace{2cm}} + 180 = 580$	A 12	820 400
13.) ●●	$\underline{\hspace{2cm}} - 100 = 700$	$420 + 180 = \underline{\hspace{2cm}}$	A 13	800 600
14.) ●●	$454 - 18 = \underline{\hspace{2cm}}$	$40 + \underline{\hspace{2cm}} = 240$	A 14	436 200
15.) ●●	$\underline{\hspace{2cm}} - 180 = 620$	$\underline{\hspace{2cm}} - 330 = 370$	A 15	800 700

© 2015 Bernhard Storch


erstellt mit RAGTIME EDU tools



netzwerk
lernen

Vergleiche mit dem Lösungstreifen und markiere hier, wie du

zur Vollversion



Name,
Klasse:

Datum:

1.) ●●

$170 - 40 = \underline{\hspace{2cm}}$

$260 + 92 = \underline{\hspace{2cm}}$

A 1

130
352

2.) ●●

$351 - 54 = \underline{\hspace{2cm}}$

$200 - 96 = \underline{\hspace{2cm}}$

A 2

297
104

3.) ●●

$300 + 10 = \underline{\hspace{2cm}}$

$150 + 9 = \underline{\hspace{2cm}}$

A 3

310
159

4.) ●●

$322 - 100 = \underline{\hspace{2cm}}$

$300 + 100 = \underline{\hspace{2cm}}$

A 4

222
400

5.) ●●

$500 - 110 = \underline{\hspace{2cm}}$

$350 + 60 = \underline{\hspace{2cm}}$

A 5

390
410

6.) ●●

$213 - 30 = \underline{\hspace{2cm}}$

$300 - 140 = \underline{\hspace{2cm}}$

A 6

183
160

7.) ●●

$300 + 200 = \underline{\hspace{2cm}}$

$400 - 200 = \underline{\hspace{2cm}}$

A 7

500
200

8.) ●●

$520 - \underline{\hspace{2cm}} = 450$

$400 - 200 = \underline{\hspace{2cm}}$

A 8

70
200

9.) ●●

$270 + 400 = \underline{\hspace{2cm}}$

$260 + \underline{\hspace{2cm}} = 390$

A 9

670
130

10.) ●●

$138 - 90 = \underline{\hspace{2cm}}$

$290 - 180 = \underline{\hspace{2cm}}$

A 10

48
110

11.) ●●

$\underline{\hspace{2cm}} - 190 = 273$

$\underline{\hspace{2cm}} - 20 = 480$

A 11

463
500

12.) ●●

$400 + 380 = \underline{\hspace{2cm}}$

$300 - \underline{\hspace{2cm}} = 210$

A 12

780
90

13.) ●●

$700 + \underline{\hspace{2cm}} = 900$

$\underline{\hspace{2cm}} - 200 = 437$

A 13

200
637

14.) ●●

$\underline{\hspace{2cm}} - 430 = 70$

$610 + 96 = \underline{\hspace{2cm}}$

A 14

500
706

15.) ●●

$\underline{\hspace{2cm}} - 300 = 340$

$760 + 200 = \underline{\hspace{2cm}}$

A 15

640
960

© 2015 Bernhard Storch

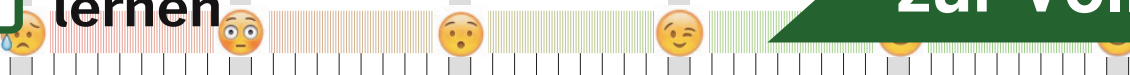
erstellt mit RAGTIME EDU tools



netzwerk
lernen

Vergleiche mit dem Lösungstreifen und markiere hier, wie du

zur Vollversion



Name,
Klasse:

Datum:

1.) ●●

$150 - 100 = \underline{\hspace{2cm}}$

$260 - 130 = \underline{\hspace{2cm}}$

A 1

50
130

2.) ●●

$70 + 290 = \underline{\hspace{2cm}}$

$370 + 50 = \underline{\hspace{2cm}}$

A 2

360
420

3.) ●●

$70 + 200 = \underline{\hspace{2cm}}$

$237 - 170 = \underline{\hspace{2cm}}$

A 3

270
67

4.) ●●

$500 - 40 = \underline{\hspace{2cm}}$

$210 + 60 = \underline{\hspace{2cm}}$

A 4

460
270

5.) ●●

$420 - 80 = \underline{\hspace{2cm}}$

$530 - 29 = \underline{\hspace{2cm}}$

A 5

340
501

6.) ●●

$500 + 133 = \underline{\hspace{2cm}}$

$213 - \underline{\hspace{2cm}} = 163$

A 6

633
50

7.) ●●

$391 - 200 = \underline{\hspace{2cm}}$

$437 - 53 = \underline{\hspace{2cm}}$

A 7

191
384

8.) ●●

$260 - 49 = \underline{\hspace{2cm}}$

$100 + 30 = \underline{\hspace{2cm}}$

A 8

211
130

9.) ●●

$310 - \underline{\hspace{2cm}} = 256$

$400 - 50 = \underline{\hspace{2cm}}$

A 9

54
350

10.) ●●

$600 + \underline{\hspace{2cm}} = 730$

$700 + 111 = \underline{\hspace{2cm}}$

A 10

130
811

11.) ●●

$98 + \underline{\hspace{2cm}} = 648$

$490 - 330 = \underline{\hspace{2cm}}$

A 11

550
160

12.) ●●

$600 - 200 = \underline{\hspace{2cm}}$

$500 + \underline{\hspace{2cm}} = 561$

A 12

400
61

13.) ●●

$440 + \underline{\hspace{2cm}} = 500$

$313 - \underline{\hspace{2cm}} = 113$

A 13

60
200

14.) ●●

$500 + \underline{\hspace{2cm}} = 550$

$220 + 500 = \underline{\hspace{2cm}}$

A 14

50
720

15.) ●●

$700 - \underline{\hspace{2cm}} = 560$

$500 - \underline{\hspace{2cm}} = 120$

A 15

140
380

© 2015 Bernhard Storch

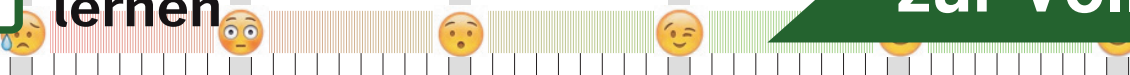
erstellt mit RAGTIME EDU tools



netzwerk
lernen

Vergleiche mit dem Lösungstreifen und markiere hier, wie du

zur Vollversion



Name:
Klasse:

Datum:

1.) ●●

$300 - 100 = \underline{\hspace{2cm}}$

$133 - 100 = \underline{\hspace{2cm}}$

A 1

200
33

2.) ●●

$201 - 200 = \underline{\hspace{2cm}}$

$273 - 10 = \underline{\hspace{2cm}}$

A 2

1
263

3.) ●●

$80 + 270 = \underline{\hspace{2cm}}$

$450 + 50 = \underline{\hspace{2cm}}$

A 3

350
500

4.) ●●

$410 + 40 = \underline{\hspace{2cm}}$

$240 - 200 = \underline{\hspace{2cm}}$

A 4

450
40

5.) ●●

$270 - 15 = \underline{\hspace{2cm}}$

$333 - 200 = \underline{\hspace{2cm}}$

A 5

255
133

6.) ●●

$300 - \underline{\hspace{2cm}} = 210$

$200 + 100 = \underline{\hspace{2cm}}$

A 6

90
300

7.) ●●

$500 + \underline{\hspace{2cm}} = 653$

$480 + 130 = \underline{\hspace{2cm}}$

A 7

153
610

8.) ●●

$400 + 69 = \underline{\hspace{2cm}}$

$400 - \underline{\hspace{2cm}} = 80$

A 8

469
320

9.) ●●

$530 - \underline{\hspace{2cm}} = 480$

$200 + \underline{\hspace{2cm}} = 420$

A 9

50
220

10.) ●●

$200 + 300 = \underline{\hspace{2cm}}$

$670 - \underline{\hspace{2cm}} = 611$

A 10

500
59

11.) ●●

$700 + 20 = \underline{\hspace{2cm}}$

$\underline{\hspace{2cm}} - 80 = 421$

A 11

720
501

12.) ●●

$509 - 260 = \underline{\hspace{2cm}}$

$590 - \underline{\hspace{2cm}} = 360$

A 12

249
230

13.) ●●

$800 + 97 = \underline{\hspace{2cm}}$

$\underline{\hspace{2cm}} - 81 = 150$

A 13

897
231

14.) ●●

$500 + \underline{\hspace{2cm}} = 900$

$160 - \underline{\hspace{2cm}} = 80$

A 14

400
80

15.) ●●

$350 + 610 = \underline{\hspace{2cm}}$

$\underline{\hspace{2cm}} - 200 = 380$

A 15

960
580

© 2015 Bernhard Storch

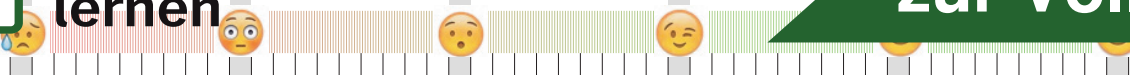
erstellt mit RAGTIME EDU tools



netzwerk
lernen

Vergleiche mit dem Lösungstreifen und markiere hier, wie du

zur Vollversion



Name:
Klasse:

Datum:

1.) ●●	$239 - 180 = \underline{\hspace{2cm}}$	$111 - 100 = \underline{\hspace{2cm}}$	A 1	59 11
2.) ●●	$132 - 70 = \underline{\hspace{2cm}}$	$244 - 210 = \underline{\hspace{2cm}}$	A 2	62 34
3.) ●●	$80 + 330 = \underline{\hspace{2cm}}$	$400 + 145 = \underline{\hspace{2cm}}$	A 3	410 545
4.) ●●	$200 + 200 = \underline{\hspace{2cm}}$	$240 - 220 = \underline{\hspace{2cm}}$	A 4	400 20
5.) ●●	$292 - 200 = \underline{\hspace{2cm}}$	$437 - 150 = \underline{\hspace{2cm}}$	A 5	92 287
6.) ●●	$70 + 300 = \underline{\hspace{2cm}}$	$542 - 74 = \underline{\hspace{2cm}}$	A 6	370 468
7.) ●●	$220 - \underline{\hspace{2cm}} = 209$	$530 + \underline{\hspace{2cm}} = 650$	A 7	11 120
8.) ●●	$400 + \underline{\hspace{2cm}} = 468$	$400 + \underline{\hspace{2cm}} = 410$	A 8	68 10
9.) ●●	$274 - 60 = \underline{\hspace{2cm}}$	$590 - 120 = \underline{\hspace{2cm}}$	A 9	214 470
10.) ●●	$428 - \underline{\hspace{2cm}} = 228$	$513 - 96 = \underline{\hspace{2cm}}$	A 10	200 417
11.) ●●	$300 - 10 = \underline{\hspace{2cm}}$	$500 - \underline{\hspace{2cm}} = 430$	A 11	290 70
12.) ●●	$700 - 120 = \underline{\hspace{2cm}}$	$292 - 38 = \underline{\hspace{2cm}}$	A 12	580 254
13.) ●●	$400 - \underline{\hspace{2cm}} = 50$	$\underline{\hspace{2cm}} + 200 = 300$	A 13	350 100
14.) ●●	$310 - \underline{\hspace{2cm}} = 150$	$\underline{\hspace{2cm}} - 300 = 180$	A 14	160 480
15.) ●●	$507 - \underline{\hspace{2cm}} = 307$	$824 - 70 = \underline{\hspace{2cm}}$	A 15	200 754

© 2015 Bernhard Storch


erstellt mit RAGTIME EDU tools



netzwerk
lernen

Vergleiche mit dem Lösungstreifen und markiere hier, wie du

zur Vollversion



Name,
Klasse:

Datum:

1.) ●●

$300 - 71 = \underline{\hspace{2cm}}$

$151 - 49 = \underline{\hspace{2cm}}$

A 1

229
102

2.) ●●

$100 + 110 = \underline{\hspace{2cm}}$

$134 - 62 = \underline{\hspace{2cm}}$

A 2

210
72

3.) ●●

$100 + 400 = \underline{\hspace{2cm}}$

$230 - 90 = \underline{\hspace{2cm}}$

A 3

500
140

4.) ●●

$400 - 18 = \underline{\hspace{2cm}}$

$100 + 200 = \underline{\hspace{2cm}}$

A 4

382
300

5.) ●●

$249 - 200 = \underline{\hspace{2cm}}$

$90 - 20 = \underline{\hspace{2cm}}$

A 5

49
70

6.) ●●

$500 + \underline{\hspace{2cm}} = 590$

$424 - 100 = \underline{\hspace{2cm}}$

A 6

90
324

7.) ●●

$300 + \underline{\hspace{2cm}} = 308$

$304 - \underline{\hspace{2cm}} = 204$

A 7

8
100

8.) ●●

$260 - 40 = \underline{\hspace{2cm}}$

$211 - \underline{\hspace{2cm}} = 1$

A 8

220
210

9.) ●●

$100 + 400 = \underline{\hspace{2cm}}$

$150 + \underline{\hspace{2cm}} = 250$

A 9

500
100

10.) ●●

$700 + 69 = \underline{\hspace{2cm}}$

$551 - 70 = \underline{\hspace{2cm}}$

A 10

769
481

11.) ●●

$505 - 160 = \underline{\hspace{2cm}}$

$332 - \underline{\hspace{2cm}} = 132$

A 11

345
200

12.) ●●

$600 + \underline{\hspace{2cm}} = 830$

$800 - \underline{\hspace{2cm}} = 772$

A 12

230
28

13.) ●●

$644 - 210 = \underline{\hspace{2cm}}$

$130 + \underline{\hspace{2cm}} = 160$

A 13

434
30

14.) ●●

$\underline{\hspace{2cm}} + 400 = 401$

$360 - 170 = \underline{\hspace{2cm}}$

A 14

1
190

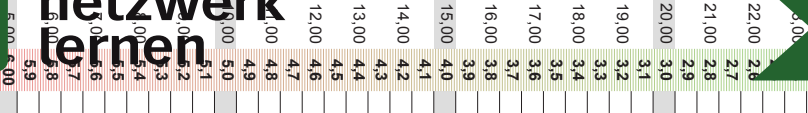
15.) ●●

$727 - 40 = \underline{\hspace{2cm}}$

$75 + \underline{\hspace{2cm}} = 95$

A 15

687
20



Name:
Klasse:

Datum:

1.) ●●

$400 - 59 = \underline{\hspace{2cm}}$

$28 + 290 = \underline{\hspace{2cm}}$

A 1

341
318

2.) ●●

$321 - 84 = \underline{\hspace{2cm}}$

$400 - 100 = \underline{\hspace{2cm}}$

A 2

237
300

3.) ●●

$300 - 110 = \underline{\hspace{2cm}}$

$424 - 64 = \underline{\hspace{2cm}}$

A 3

190
360

4.) ●●

$300 + 180 = \underline{\hspace{2cm}}$

$500 + 69 = \underline{\hspace{2cm}}$

A 4

480
569

5.) ●●

$460 - 7 = \underline{\hspace{2cm}}$

$20 + 50 = \underline{\hspace{2cm}}$

A 5

453
70

6.) ●●

$332 - 210 = \underline{\hspace{2cm}}$

$90 + \underline{\hspace{2cm}} = 470$

A 6

122
380

7.) ●●

$90 - 70 = \underline{\hspace{2cm}}$

$200 - \underline{\hspace{2cm}} = 120$

A 7

20
80

8.) ●●

$84 - 16 = \underline{\hspace{2cm}}$

$500 + 200 = \underline{\hspace{2cm}}$

A 8

68
700

9.) ●●

$613 - \underline{\hspace{2cm}} = 564$

$640 - 75 = \underline{\hspace{2cm}}$

A 9

49
565

10.) ●●

$400 + \underline{\hspace{2cm}} = 740$

$240 - \underline{\hspace{2cm}} = 140$

A 10

340
100

11.) ●●

$470 - \underline{\hspace{2cm}} = 390$

$\underline{\hspace{2cm}} - 210 = 203$

A 11

80
413

12.) ●●

$500 + \underline{\hspace{2cm}} = 700$

$500 - \underline{\hspace{2cm}} = 360$

A 12

200
140

13.) ●●

$160 + \underline{\hspace{2cm}} = 330$

$340 - \underline{\hspace{2cm}} = 100$

A 13

170
240

14.) ●●

$\underline{\hspace{2cm}} + 600 = 900$

$\underline{\hspace{2cm}} - 100 = 500$

A 14

300
600

15.) ●●

$500 + \underline{\hspace{2cm}} = 590$

$640 - 40 = \underline{\hspace{2cm}}$

A 15

90
600

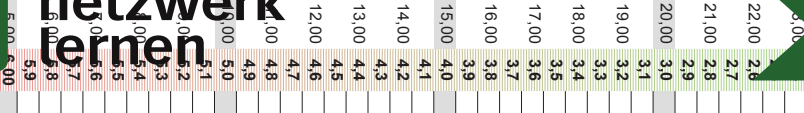
© 2015 Bernhard Storch

erstellt mit RAGTIMEEDU tools



netzwerk
lernen

zur Vollversion



Addition und Subtraktion im Zahlenraum 1 000

Code Nr. 50

Nr. 50

Name:
Klasse:

Datum:

1.) ●●	$240 - 31 = \underline{\hspace{2cm}}$	$100 + 80 = \underline{\hspace{2cm}}$	A 1	209 180
2.) ●●	$300 + 140 = \underline{\hspace{2cm}}$	$200 + 240 = \underline{\hspace{2cm}}$	A 2	440 440
3.) ●●	$252 - 240 = \underline{\hspace{2cm}}$	$302 - 100 = \underline{\hspace{2cm}}$	A 3	12 202
4.) ●●	$400 - 87 = \underline{\hspace{2cm}}$	$100 + 60 = \underline{\hspace{2cm}}$	A 4	313 160
5.) ●●	$400 + 100 = \underline{\hspace{2cm}}$	$510 + 33 = \underline{\hspace{2cm}}$	A 5	500 543
6.) ●●	$400 + 150 = \underline{\hspace{2cm}}$	$400 + \underline{\hspace{1cm}} = 600$	A 6	550 200
7.) ●●	$480 - \underline{\hspace{1cm}} = 433$	$411 - 90 = \underline{\hspace{2cm}}$	A 7	47 321
8.) ●●	$600 - 100 = \underline{\hspace{2cm}}$	$100 + 300 = \underline{\hspace{2cm}}$	A 8	500 400
9.) ●●	$600 - \underline{\hspace{1cm}} = 500$	$116 - \underline{\hspace{1cm}} = 106$	A 9	100 10
10.) ●●	$420 - \underline{\hspace{1cm}} = 220$	$60 + \underline{\hspace{1cm}} = 400$	A 10	200 340
11.) ●●	$384 - 380 = \underline{\hspace{2cm}}$	$\underline{\hspace{1cm}} - 260 = 144$	A 11	4 404
12.) ●●	$660 + 120 = \underline{\hspace{2cm}}$	$\underline{\hspace{1cm}} + 580 = 676$	A 12	780 96
13.) ●●	$\underline{\hspace{1cm}} + 600 = 690$	$\underline{\hspace{1cm}} - 110 = 690$	A 13	90 800
14.) ●●	$162 - \underline{\hspace{1cm}} = 62$	$700 + 200 = \underline{\hspace{2cm}}$	A 14	100 900
15.) ●●	$700 + \underline{\hspace{1cm}} = 790$	$\underline{\hspace{1cm}} + 69 = 709$	A 15	90 640

© 2015 Bernhard Storch

erstellt mit RAGTIME EDU tools



netzwerk
lernen

zur Vollversion

